




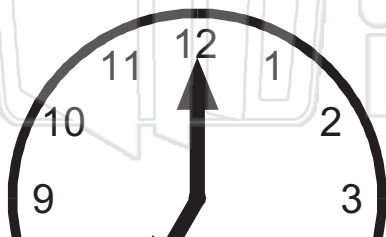


Name \_\_\_\_\_ Class \_\_\_\_\_ Date \_\_\_\_\_




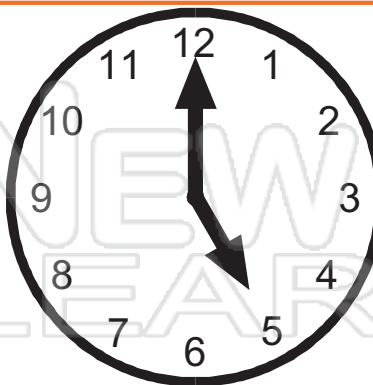
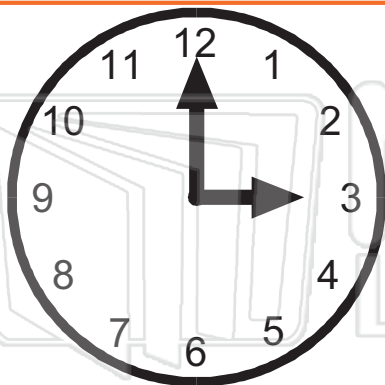
This clock says 4 o'clock or 4:00.

- On the Hour, the long hand always points to the 12 on the o'clock.
- The short hand points to the hour that it is.



## PREVIEW

Please [Sign In](#) or [Sign Up](#) to download the printable version of this worksheet



\_\_\_\_\_




\_\_\_\_\_



\_\_\_\_\_

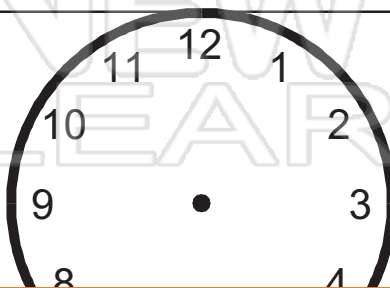
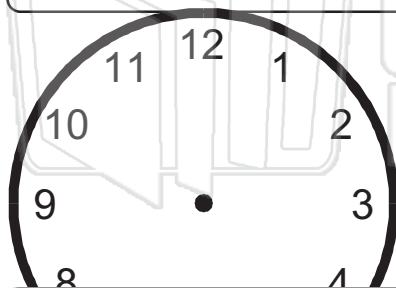


Name \_\_\_\_\_ Class \_\_\_\_\_ Date \_\_\_\_\_



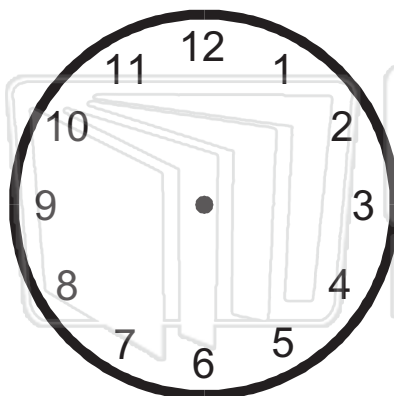
If you wanted to show 4 o'clock on this clock face you would place the hands as shown.

● Draw these times on the clock faces.

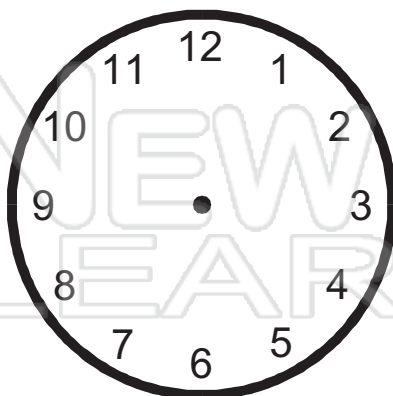


## PREVIEW

Please [Sign In](#) or [Sign Up](#) to download the printable version of this worksheet



▶ 11 o'clock




▶ 6 o'clock



▶ 12 o'clock



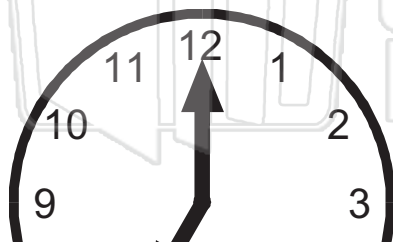


Name \_\_\_\_\_ Class \_\_\_\_\_ Date \_\_\_\_\_



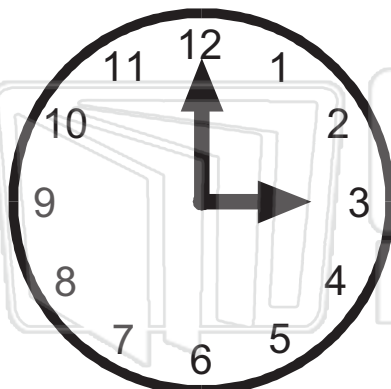
This clock says 4 o'clock or 4:00.

- On the Hour, the long hand always points to the 12 on the o'clock.
- The short hand points to the hour that it is.



## PREVIEW

Please [Sign In](#) or [Sign Up](#) to download the printable version of this worksheet



3:00




5:00



8:00



Name \_\_\_\_\_ Class \_\_\_\_\_ Date \_\_\_\_\_



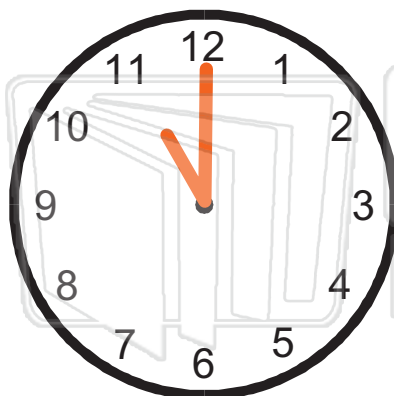
If you wanted to show 4 o'clock on this clock face you would place the hands as shown.

● Draw these times on the clock faces.




## PREVIEW

Please [Sign In](#) or [Sign Up](#) to download the printable version of this worksheet



▶ 11 o'clock



▶ 6 o'clock



▶ 12 o'clock