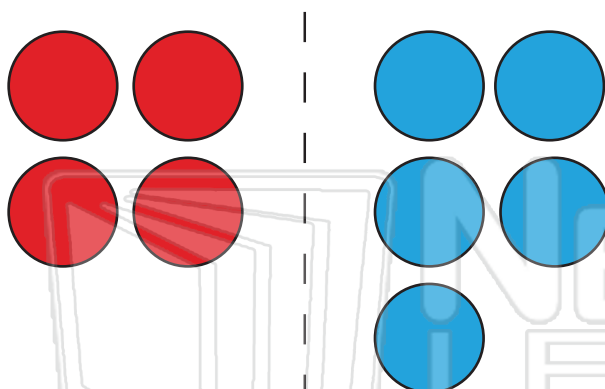




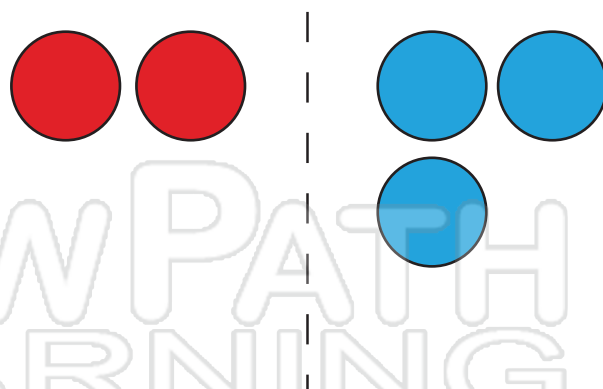
Name \_\_\_\_\_ Class \_\_\_\_\_ Date \_\_\_\_\_

Use the counters to add numbers. Fill in the number sentence.



a.

$$\underline{\quad} + \underline{\quad} = \underline{\quad}$$



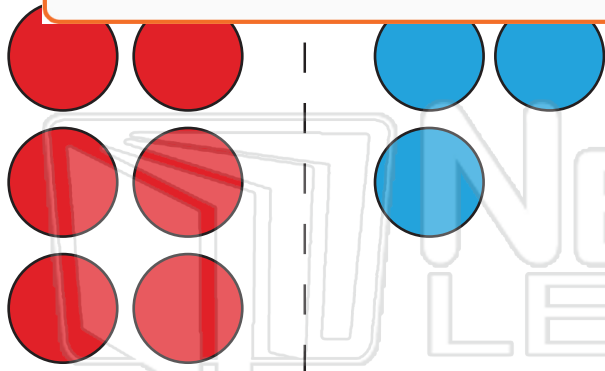
d.

$$\underline{\quad} + \underline{\quad} = \underline{\quad}$$



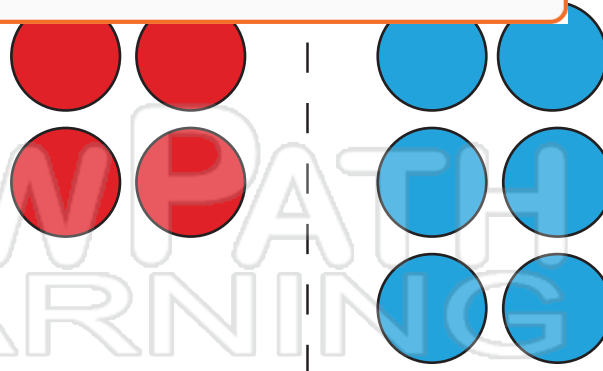
## PREVIEW

Please [Sign In](#) or [Sign Up](#) to download the printable version of this worksheet



c.

$$\underline{\quad} + \underline{\quad} = \underline{\quad}$$



f.

$$\underline{\quad} + \underline{\quad} = \underline{\quad}$$



Name \_\_\_\_\_ Class \_\_\_\_\_ Date \_\_\_\_\_

Use the counters to add numbers. Fill in the number sentence.

a.

\_\_\_\_\_ + \_\_\_\_\_ = \_\_\_\_\_

d.

\_\_\_\_\_ + \_\_\_\_\_ = \_\_\_\_\_

b.

**PREVIEW**

Please [Sign In](#) or [Sign Up](#) to download the printable version of this worksheet

c.

\_\_\_\_\_ + \_\_\_\_\_ = \_\_\_\_\_


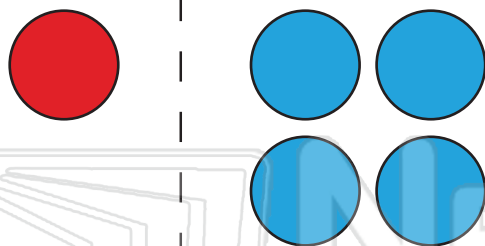
f.

\_\_\_\_\_ + \_\_\_\_\_ = \_\_\_\_\_



Name \_\_\_\_\_ Class \_\_\_\_\_ Date \_\_\_\_\_

Use the counters to add numbers. Fill in the number sentence.



a.

\_\_\_\_\_ + \_\_\_\_\_ = \_\_\_\_\_

d.

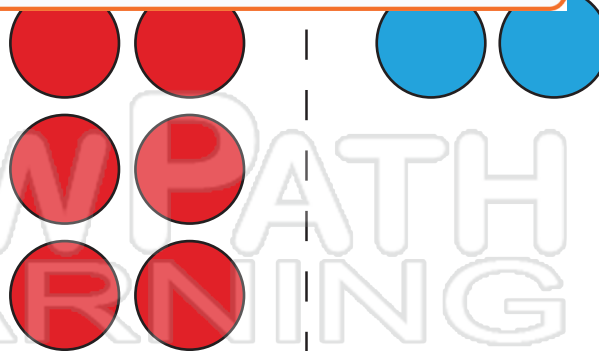
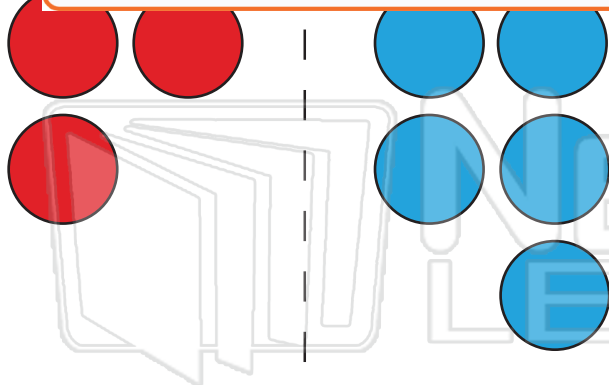
\_\_\_\_\_ + \_\_\_\_\_ = \_\_\_\_\_



## PREVIEW

Please [Sign In](#) or [Sign Up](#) to download the printable version of this worksheet

b.



c.

\_\_\_\_\_ + \_\_\_\_\_ = \_\_\_\_\_

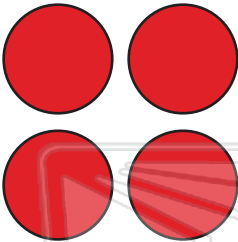


f.


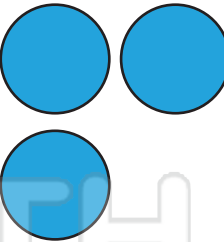

\_\_\_\_\_ + \_\_\_\_\_ = \_\_\_\_\_



Name \_\_\_\_\_ Class \_\_\_\_\_ Date \_\_\_\_\_

Use the counters to add numbers. Fill in the number sentence.

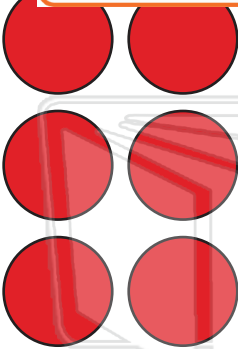
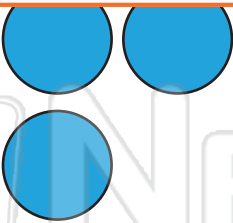

a.  +  = 




d.  +  = 



## PREVIEW

Please [Sign In](#) or [Sign Up](#) to download the printable version of this worksheet

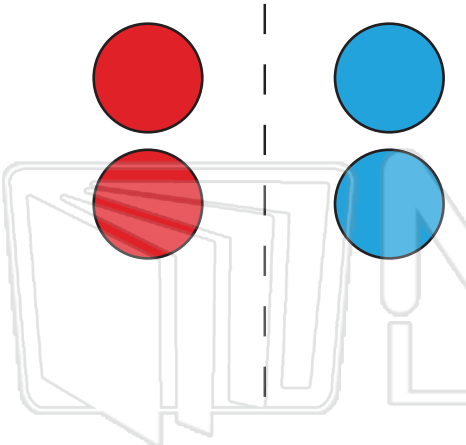
c.  +  = 

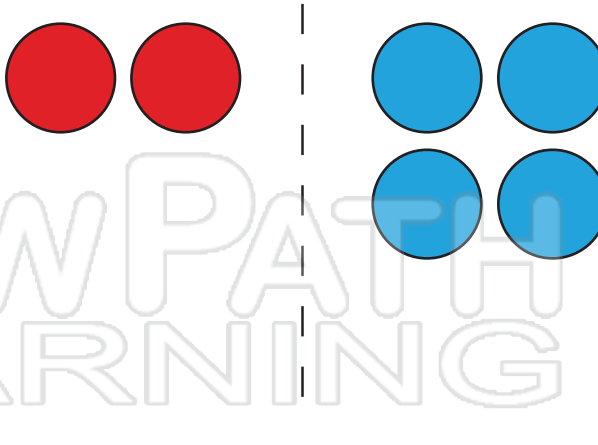
f.  +  = 



Name \_\_\_\_\_ Class \_\_\_\_\_ Date \_\_\_\_\_

Use the counters to add numbers. Fill in the number sentence.

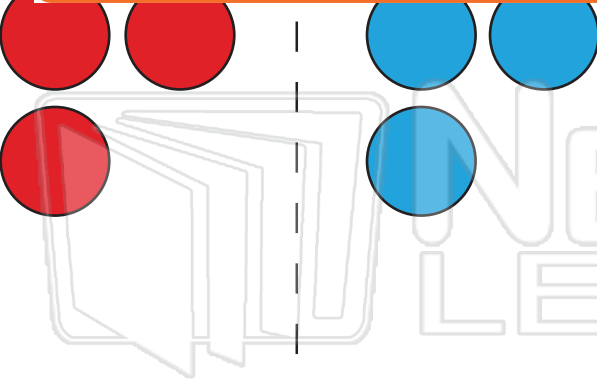
a.   
 $2 + 2 = 4$


d.   
 $2 + 4 = 6$



## PREVIEW

Please [Sign In](#) or [Sign Up](#) to download the printable version of this worksheet

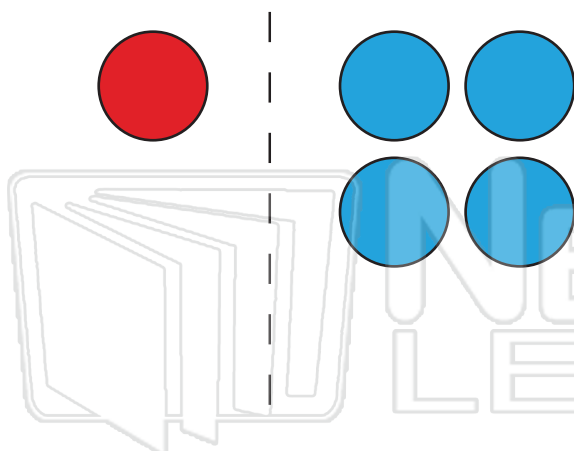
c.   
 $3 + 3 = 6$

f.   
 $5 + 2 = 7$

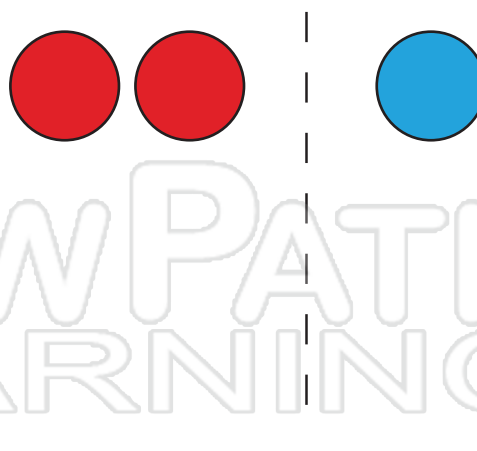


Name \_\_\_\_\_ Class \_\_\_\_\_ Date \_\_\_\_\_

Use the counters to add numbers. Fill in the number sentence.



a.  $1 + 4 = 5$

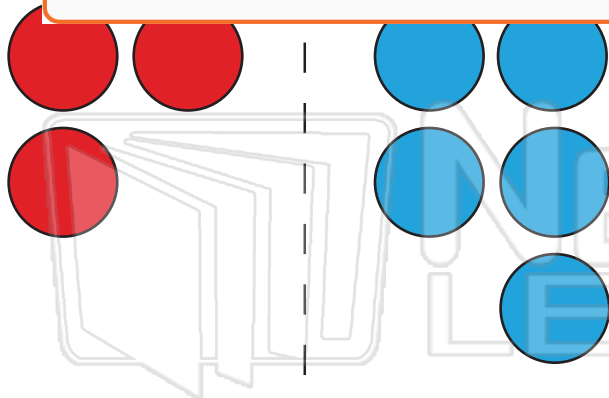


d.  $2 + 1 = 3$

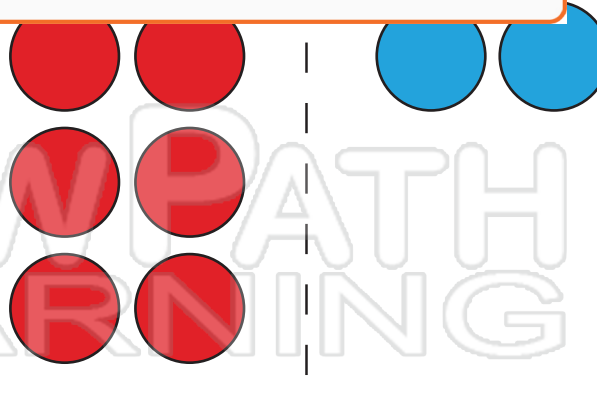


## PREVIEW

Please [Sign In](#) or [Sign Up](#) to download the printable version of this worksheet



c.  $3 + 5 = 8$



f.  $6 + 2 = 8$