




Flag Making Pictograph






Math

Name _____ Class _____ Date _____

There was a paper flag making contest at our school. The pictograph shows the results. Use the information to answer the questions below.



FLAG MAKING CONTEST

Student Name	# of Flags Made
Thomas	
Betsy	
Abbie	
Martha	
George	

 KEY = 3 flags

- How many flags did Betsy make? _____
- How many flags did George make? _____
- How many flags did Thomas make? _____
- Who made the most flags? _____
- Who made the fewest flags? _____
- How many more flags did George make than Thomas? _____
- What was the total number of flags made? _____
- How many fewer flags did Abbie make than Betsy? _____
- How many star symbols are needed to show 12 flags? _____
- Who made the same amount of flags? _____




Count the Dots Picture Coloring

Math

Name _____ Class _____ Date _____

Count the dots. Color each section using the key at the bottom.



YELLOW = 1

RED = 2

LIGHT BLUE = 6

ORANGE = 3


DARK BLUE = 5

BROWN = 4



Name _____ Class _____ Date _____

There was a paper flag making contest at our school. The pictograph shows the results. Use the information to answer the questions below.



FLAG MAKING CONTEST

Student Name	# of Flags Made
Thomas	★ ★ ★ ★
Betsy	★ ★ ★ ★ ★ ★ ★ ★
Abbie	★ ★ ★ ★ ★
Martha	★ ★ ★ ★ ★ ★
George	★ ★ ★ ★ ★ ★

 KEY = 3 flags

- How many flags did Betsy make? 24
- How many flags did George make? 18
- How many flags did Thomas make? 12
- Who made the most flags? Betsy
- Who made the fewest flags? Thomas
- How many more flags did George make than Thomas? 6
- What was the total number of flags made? 87
- How many fewer flags did Abbie make than Betsy? 9
- How many star symbols are needed to show 12 flags? 4
- Who made the same amount of flags? Martha & George both made 18



Count the Dots Picture Coloring

Math

Name _____ Class _____ Date _____

Count the dots. Color each section using the key at the bottom.



YELLOW = 1

RED = 2

LIGHT BLUE = 6

ORANGE = 3

DARK BLUE = 5

BROWN = 4