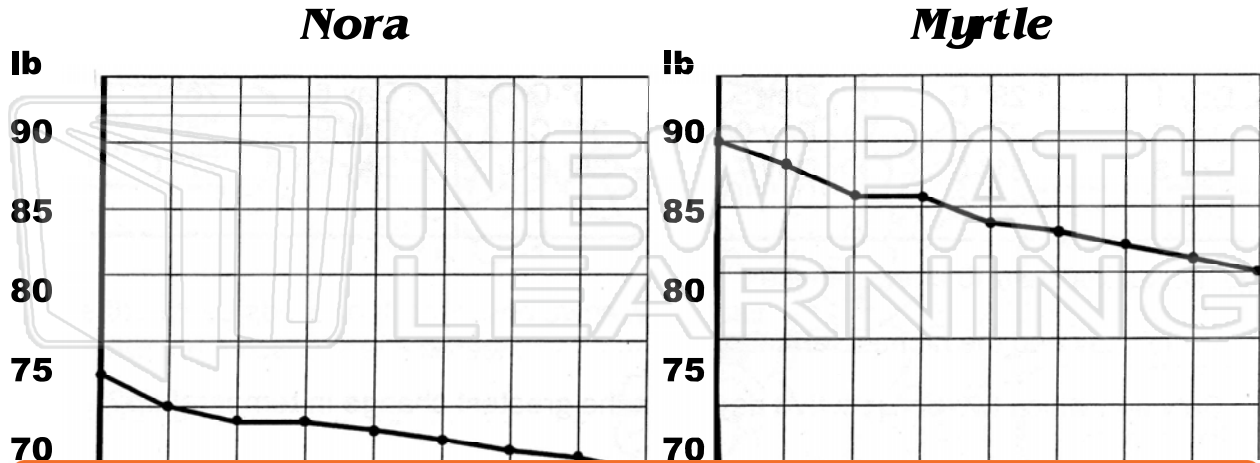




Name \_\_\_\_\_ Class \_\_\_\_\_ Date \_\_\_\_\_

Nora Number and Myrtle Measure noticed that over the years they had been putting on more weight. They decided to join Weight Watchers and recorded their weight loss over the first two months.



**PREVIEW**

Please [Sign In](#) or [Sign Up](#) to download the printable version of this worksheet

- .....
4. Which week did not result in any weight loss at all?  
.....
5. What was the average weekly weight loss for Nora and Myrtle?  
.....
6. How much heavier than Nora was Myrtle after Week 8?.....  
.....



Name \_\_\_\_\_ Class \_\_\_\_\_ Date \_\_\_\_\_

Record Myrtle's weekly weight loss on the graph below:

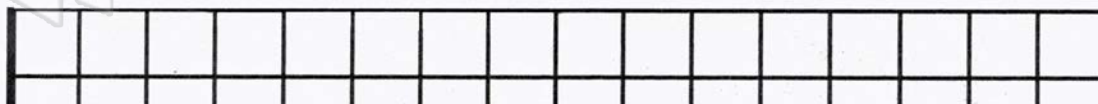
Week	Pounds	Week	Pounds	Week	Pounds	Week	Pounds
Week 9	75	Week 13	74	Week 17	72	Week 21	66
Week 10	74	Week 14	72	Week 18	70	Week 22	64
Week 11	73	Week 15	71	Week 19	68	Week 23	63
Week 12	73	Week 16	73	Week 20	67	Week 24	62

## Myrtle's Weight Loss

lb

85

80



## PREVIEW

Please [Sign In](#) or [Sign Up](#) to download the printable version of this worksheet



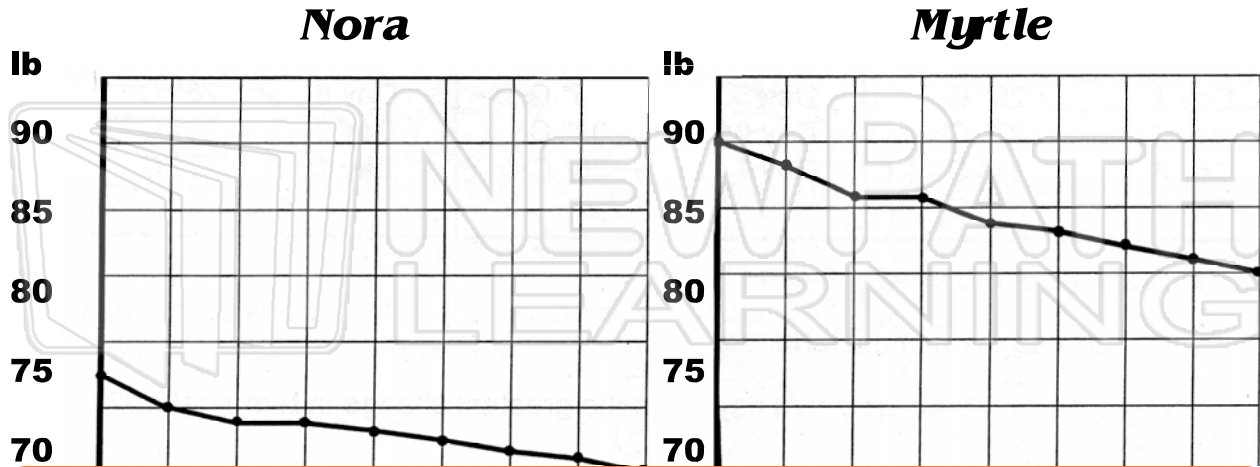
### Challenge:

Considering Nora put on weight while she was on her diet (Weeks 12 and 16), what was her overall weekly average weight loss from Weeks 9 - 24?



Name \_\_\_\_\_ Class \_\_\_\_\_ Date \_\_\_\_\_

Nora Number and Myrtle Measure noticed that over the years they had been putting on more weight. They decided to join Weight Watchers and recorded their weight loss over the first two months.



**PREVIEW**

Please [Sign In](#) or [Sign Up](#) to download the printable version of this worksheet

Myrtle .....

4. Which week did not result in any weight loss at all?  
Week three .....

5. What was the average weekly weight loss for Nora and Myrtle?  
Nora - 1 lb, Myrtle - 1.25 lb .....

6. How much heavier than Nora was Myrtle after Week 8? 15 lb .....



Name \_\_\_\_\_ Class \_\_\_\_\_ Date \_\_\_\_\_

Record Myrtle's weekly weight loss on the graph below:

Week	Pounds	Week	Pounds	Week	Pounds	Week	Pounds
Week 9	75	Week 13	74	Week 17	72	Week 21	66
Week 10	74	Week 14	72	Week 18	70	Week 22	64
Week 11	73	Week 15	71	Week 19	68	Week 23	63
Week 12	73	Week 16	73	Week 20	67	Week 24	62

### Myrtle's Weight Loss

lb

85

80



## PREVIEW

Please [Sign In](#) or [Sign Up](#) to download the printable version of this worksheet



### Challenge:

Considering Nora put on weight while she was on her diet (Weeks 12 and 16), what was her overall weekly average weight loss from Weeks 9 - 24?

The total weight loss over the 4 month period was 16 pounds. Myrtle put on weight twice which had to be taken off again. Divided by 16, the average weekly loss is 1 lb.