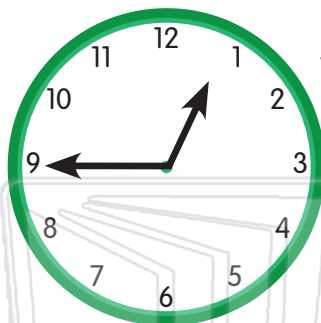




Name _____ Class _____ Date _____

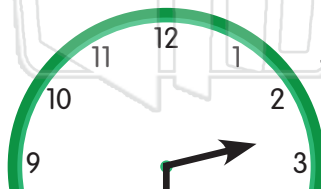
Write the time shown. Then write the new time. Draw the new time on the clock.



Time shown: _____

► 30 minutes later ►

New time: _____



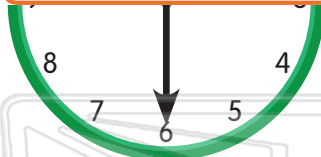
Time shown: _____

► 15 minutes earlier ►



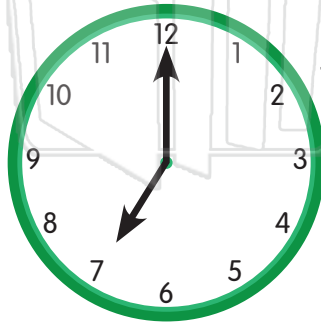
PREVIEW

Please [Sign In](#) or [Sign Up](#) to download
the printable version of this worksheet



► 10 minutes earlier ►

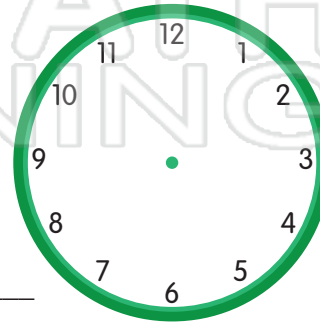
New time: _____



Time shown: _____

► 20 minutes later ►

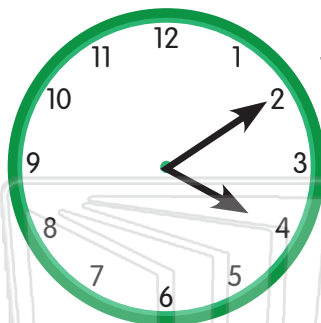
New time: _____





Name _____ Class _____ Date _____

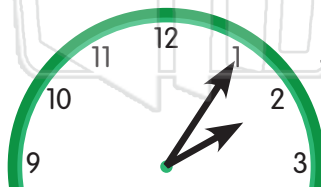
Write the time shown. Then write the new time. Draw the new time on the clock.



Time shown: _____

► 20 minutes earlier ►

New time: _____




Time shown: _____

► 15 minutes later ►



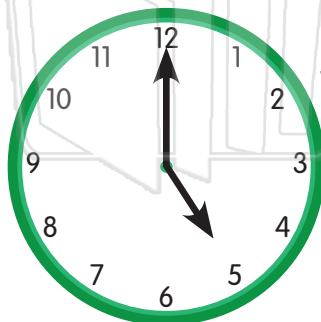
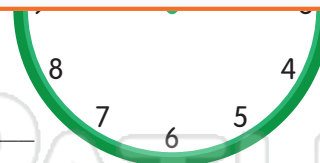
PREVIEW

Please [Sign In](#) or [Sign Up](#) to download the printable version of this worksheet



► 10 minutes earlier ►

New time: _____



Time shown: _____

► 25 minutes later ►

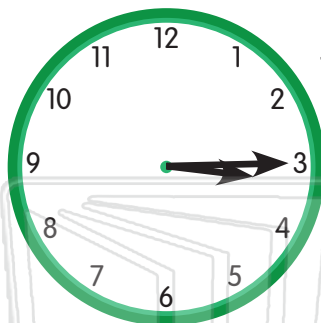
New time: _____





Name _____ Class _____ Date _____

Write the time shown. Then write the new time. Draw the new time on the clock.



Time shown: _____

► 20 minutes earlier ►

New time: _____



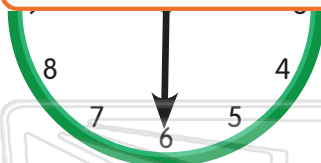
Time shown: _____

► 15 minutes later ►



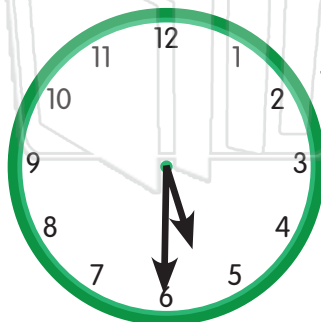
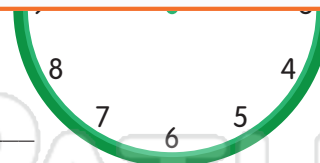
PREVIEW

Please [Sign In](#) or [Sign Up](#) to download the printable version of this worksheet



► 10 minutes earlier ►

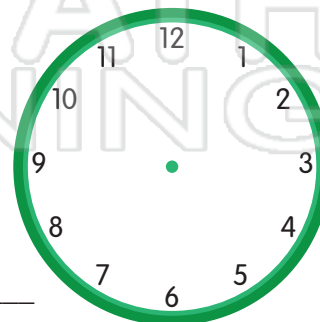
New time: _____



Time shown: _____

► 25 minutes later ►

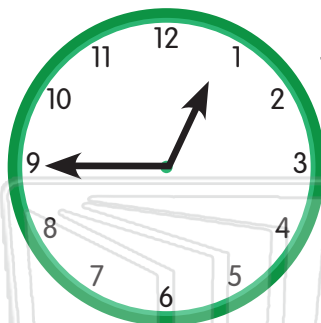
New time: _____





Name _____ Class _____ Date _____

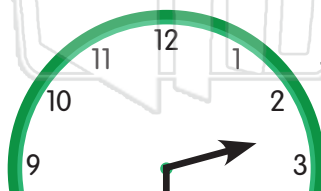
Write the time shown. Then write the new time. Draw the new time on the clock.



Time shown: 12:45

► 30 minutes later ►

New time: 1:15



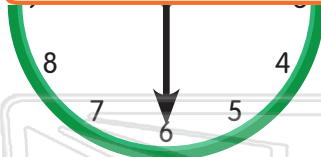
Time shown: 2:30

► 15 minutes earlier ►



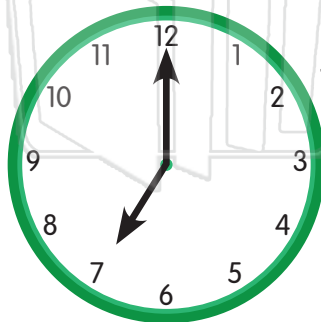
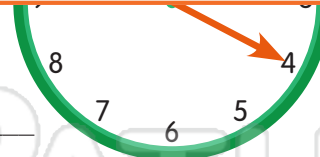
PREVIEW

Please [Sign In](#) or [Sign Up](#) to download the printable version of this worksheet



► 10 minutes earlier ►

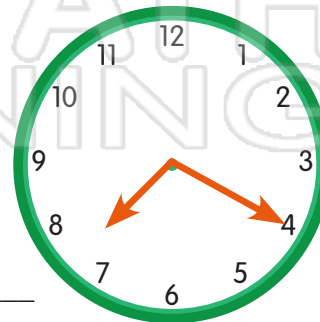
New time: 1:20



Time shown: 7:00

► 20 minutes later ►

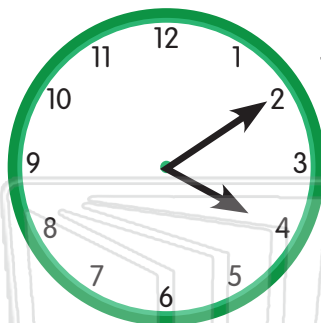
New time: 7:20





Name _____ Class _____ Date _____

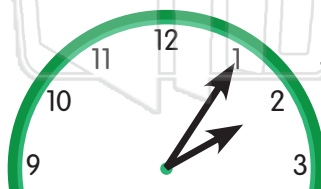
Write the time shown. Then write the new time. Draw the new time on the clock.



Time shown: 4:10

► 20 minutes earlier ►

New time: 3:50



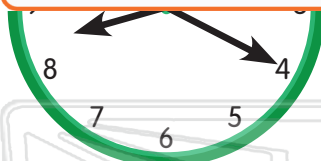
Time shown: 2:05

► 15 minutes later ►



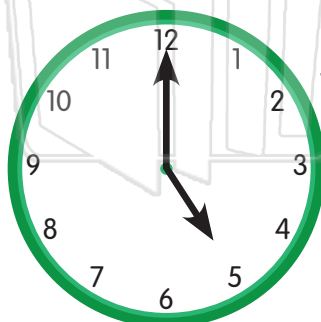
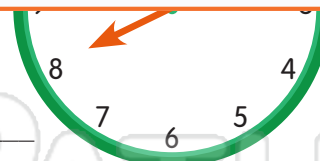
PREVIEW

Please [Sign In](#) or [Sign Up](#) to download the printable version of this worksheet



► 10 minutes earlier ►

New time: 8:10



Time shown: 5:00

► 25 minutes later ►

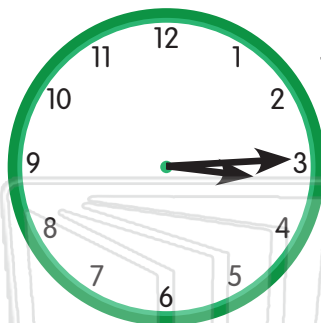
New time: 5:25





Name _____ Class _____ Date _____

Write the time shown. Then write the new time. Draw the new time on the clock.



Time shown: 3:15

► 20 minutes earlier ►

New time: 2:55



Time shown: 7:20

► 15 minutes later ►



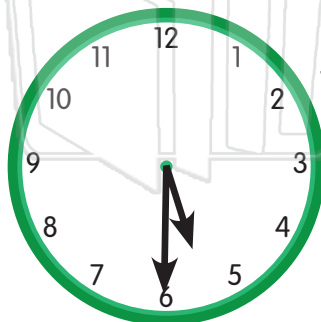
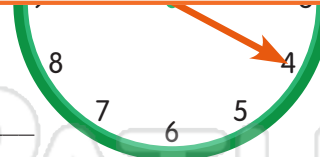
PREVIEW

Please [Sign In](#) or [Sign Up](#) to download the printable version of this worksheet



► 10 minutes earlier ►

New time: 2:20



Time shown: 5:30

► 25 minutes later ►

New time: 5:55

