






Name _____ Class _____ Date _____

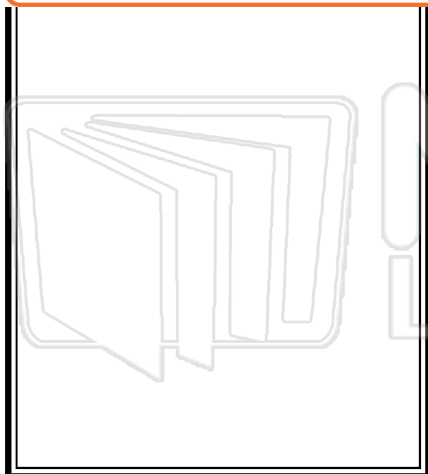
Counting Carrie counted all the different animals when she visited the zoo. She counted twice as many tigers as cheetahs. The number of leopards was three less than the number of tigers. There were five times as many zebras as leopards. Carrie counted 25 zebras.

How many animals did she see altogether at the zoo?



PREVIEW

Please [Sign In](#) or [Sign Up](#) to download the printable version of this worksheet






Name _____ Class _____ Date _____

Crazy Charlie was standing on the roof of a skyscraper. He dropped a bouncing ball onto the footpath below. Each time it touched the ground, it bounced back half as high, with the first bounce being half as high as the skyscraper.

□ If its fourth bounce was 5 meters high, what height did Charlie drop it from?




Show your work here:



PREVIEW

Please [Sign In](#) or [Sign Up](#) to download the printable version of this worksheet





Name _____ Class _____ Date _____

Counting Carrie counted all the different animals when she visited the zoo. She counted twice as many tigers as cheetahs. The number of leopards was three less than the number of tigers. There were five times as many zebras as leopards. Carrie counted 25 zebras.

How many animals did she see altogether at the zoo?

Show your work here:

42 - 8 tigers, 4 cheetahs, 5 leopards,
25 zebras



PREVIEW

Please [Sign In](#) or [Sign Up](#) to download the printable version of this worksheet





Name _____ Class _____ Date _____

Crazy Charlie was standing on the roof of a skyscraper. He dropped a bouncing ball onto the footpath below. Each time it touched the ground, it bounced back half as high, with the first bounce being half as high as the skyscraper.

□ If its fourth bounce was 5 meters high, what height did Charlie drop it from?



Show your work here:

80 meters



PREVIEW

Please [Sign In](#) or [Sign Up](#) to download the printable version of this worksheet

