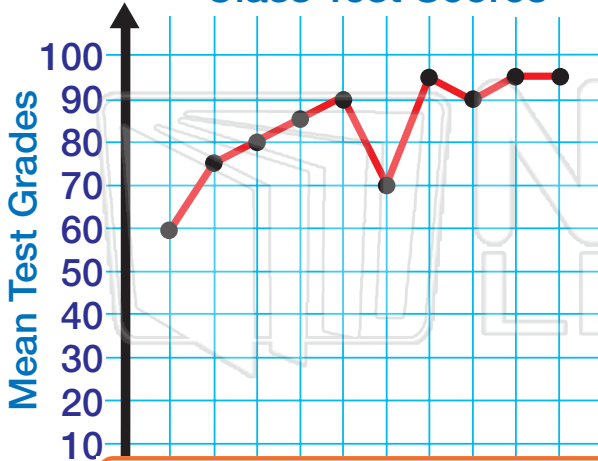




Name _____ Class _____ Date _____

Study the graphs. Use the graphs to answer the questions below.

Class Test Scores



1. The mean test grade for Test #5 is _____.
2. The mean test grade for Test #6 is _____.
3. What was the mean test score for both Test #7 and #10? _____.
4. Which test had the lowest mean grade?

5. The graph shows that over time, the test

6th Grade Classes
Mr.
Mr.
Ms.
Mr.



PREVIEW

Please [Sign In](#) or [Sign Up](#) to download the printable version of this worksheet

1 2 3 4 5 6 7 8 9 10 11 12
Students in Band

4. What's the total number of 6th grade students in the band? _____


5. How many students play in the band from both Mrs. Ruiz's class and Mr. Smith's class? _____
6. If three more of Mrs. Ruiz's students join the band, there will be _____ students from her class.



Name _____ Class _____ Date _____

Study the graphs. Use the graphs to answer the questions below.

Difficult Subjects



1. According to this circle graph, _____ % of 6th graders feel that Science is difficult.
2. The number of students who feel Math is difficult, is _____ the number of students who think English is difficult.
3. Which subject do students think is the most difficult? _____

4. En

5. Ho

Scouts

W

A

PREVIEW

Please [Sign In](#) or [Sign Up](#) to download the printable version of this worksheet

Boxes of Cookies Sold

= 5 Boxes Sold

4. What's the total number of cookie boxes sold? _____

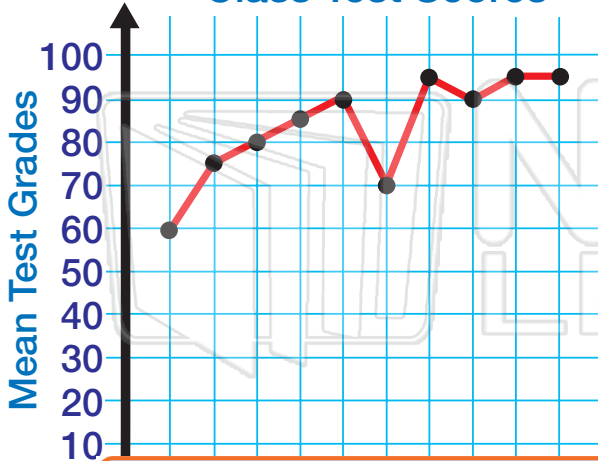
5. How many more boxes did Alyssa sell than Lori? _____
6. If Lori had sold 5 more boxes, how many would she have sold in total? _____
7. If Wendy had sold 5 more boxes of cookies, who would she have tied with?



Name _____ Class _____ Date _____

Study the graphs. Use the graphs to answer the questions below.

Class Test Scores



- The mean test grade for Test #5 is 90.
- The mean test grade for Test #6 is 70.
- What was the mean test score for both Test #7 and #10? 95.
- Which test had the lowest mean grade? #1

5. The graph shows that over time, the test



PREVIEW

Please [Sign In](#) or [Sign Up](#) to download the printable version of this worksheet

6th Grade Classes
Mr.
Mrs.
Ms.
Mr.

1 2 3 4 5 6 7 8 9 10 11 12
Students in Band

- What's the total number of 6th grade students in the band? 37


- How many students play in the band from both Mrs. Ruiz's class and Mr. Smith's class? 19
- If three more of Mrs. Ruiz's students join the band, there will be 10 students from her class in the band.



Name _____ Class _____ Date _____

Study the graphs. Use the graphs to answer the questions below.

Difficult Subjects



1. According to this circle graph, 12 % of 6th graders feel that Science is difficult.
2. The number of students who feel Math is difficult, is twice the number of students who think English is difficult.
3. Which subject do students think is the most difficult? Math

4. En

5. Ho



%

?

Scouts

W

A

PREVIEW

Please [Sign In](#) or [Sign Up](#) to download the printable version of this worksheet

Boxes of Cookies Sold

= 5 Boxes Sold

4. What's the total number of cookie boxes sold? 95

5. How many more boxes did Alyssa sell than Lori? 10

6. If Lori had sold 5 more boxes, how many would she have sold in total? 10

7. If Wendy had sold 5 more boxes of cookies, who would she have tied with?

Jodi