



Name _____ Class _____ Date _____

Read the equations. Draw the correct number of bugs in each group.



$$16 \div 4 = \underline{\quad}$$

Four empty rectangular boxes for writing the answer to the division problem.



PREVIEW


Please [Sign In](#) or [Sign Up](#) to download the printable version of this worksheet




Name _____ Class _____ Date _____

Read the equations. Draw the correct number of bugs in each group.

$$12 \div 4 = \underline{\quad}$$

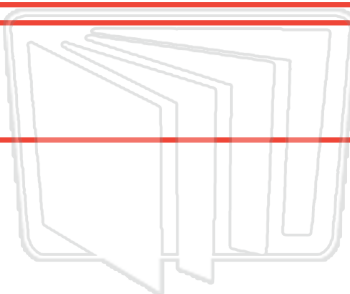


Four empty rectangular boxes for drawing the correct number of bugs.



PREVIEW

Please [Sign In](#) or [Sign Up](#) to download the printable version of this worksheet



NEW PATH
LEARNING



Name _____ Class _____ Date _____

Read the equations. Draw the correct number of bugs in each group.



$$16 \div 4 = \underline{4}$$



PREVIEW

Please [Sign In](#) or [Sign Up](#) to download the printable version of this worksheet






Name _____ Class _____ Date _____

Read the equations. Draw the correct number of bugs in each group.

$$12 \div 4 = \underline{3}$$



PREVIEW

Please [Sign In](#) or [Sign Up](#) to download the printable version of this worksheet

