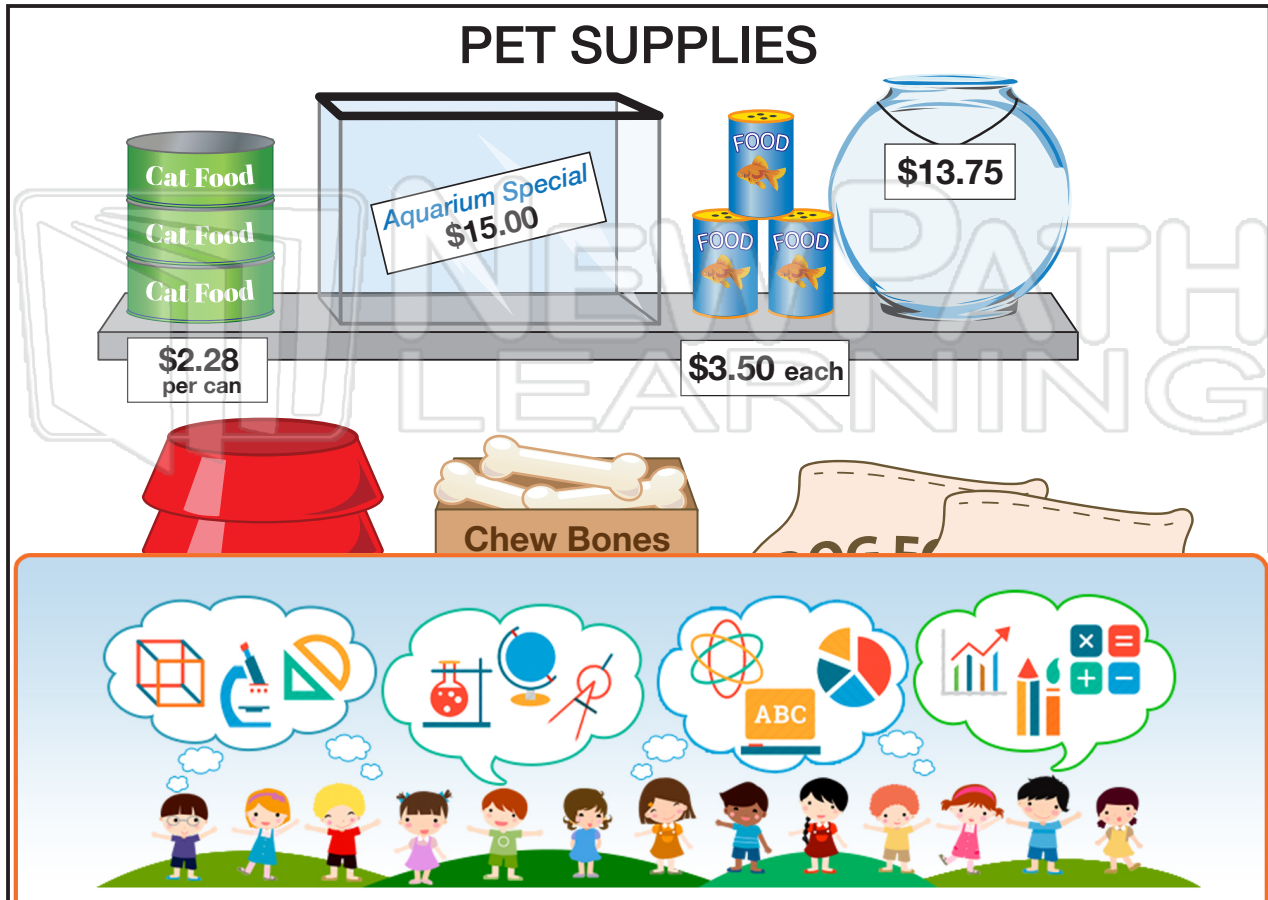




Name \_\_\_\_\_ Class \_\_\_\_\_ Date \_\_\_\_\_

Use the picture to answer the questions. Show your work.



## PREVIEW

Please [Sign In](#) or [Sign Up](#) to download  
the printable version of this worksheet

You buy 3  
\$10. How much change will you get?

You buy 2  
\$30. How much change will you get?

You buy 6 containers of fish food. You give the cashier \$20. How much change will you get?


You buy 1 bowl and 1 can of cat food. You give the cashier \$5. How much change will you get?

You buy the aquarium that's on sale. You give the cashier \$20. How much change will you get?

You buy 1 bag of dog food and 1 bone. You give the cashier \$35. How much change will you get?



Name \_\_\_\_\_ Class \_\_\_\_\_ Date \_\_\_\_\_



At the  
cashi

You b  
much

## PREVIEW

Please [Sign In](#) or [Sign Up](#) to download  
the printable version of this worksheet

You buy **1 stuffed unicorn**. You give the cashier  
\$20. How much change will you get? \_\_\_\_\_

You buy **1 race car**. You give the cashier \$7. How  
much change will you get? \_\_\_\_\_

You buy **1 whistle** and **1 xylophone**. You give the  
cashier \$20. How much change will you get? \_\_\_\_\_



Name \_\_\_\_\_ Class \_\_\_\_\_ Date \_\_\_\_\_

Use the picture to answer the questions. Show your work.



**PREVIEW**

Please [Sign In](#) or [Sign Up](#) to download the printable version of this worksheet

You buy 3 containers of fish food. You give the cashier \$20. How much change will you get? \$5.44

You buy 1 bowl and 1 can of cat food. You give the cashier \$5. How much change will you get?

You buy the aquarium that's on sale. You give the cashier \$20. How much change will you get?  $20 - (3 \times 3.50) = \$9.50$


You buy 1 bowl and 1 can of cat food. You give the cashier \$5. How much change will you get?  $5 - (2 + 2.28) = 72\text{c}$

You buy the aquarium that's on sale. You give the cashier \$20. How much change will you get?  $20 - 15 = \$5.00$

You buy 1 bag of dog food and 1 bone. You give the cashier \$35. How much change will you get?  $35 - (29.97 + .89) = \$4.14$



Name \_\_\_\_\_ Class \_\_\_\_\_ Date \_\_\_\_\_



At the  
cashi

You b  
much

25

one)

## PREVIEW

Please [Sign In](#) or [Sign Up](#) to download the printable version of this worksheet

You buy 1 stuffed unicorn. You give the cashier \$20. How much change will you get?

$$\underline{\$20.00 - \$15.50 = \$4.50}$$

You buy 1 race car. You give the cashier \$7. How much change will you get?

$$\underline{\$7.00 - \$6.75 = \$0.25}$$

You buy 1 whistle and 1 xylophone. You give the cashier \$20. How much change will you get?

$$\underline{\$20.00 - \$15.25 = \$4.75}$$