







Name _____ Class _____ Date _____

Multiply the numbers found in the shapes below. Show your work.



Fir
n



he
s.

PREVIEW

Please [Sign In](#) or [Sign Up](#) to download
the printable version of this worksheet

Fir
nu

he
ds.



NEW PATH
LEARNING



Name _____ Class _____ Date _____

Multiply the numbers found in the shapes below. Show your work.

17 41 34 50 18 12

5 57 23 3 29 42

Fir
n

he
s.



PREVIEW

Please [Sign In](#) or [Sign Up](#) to download
the printable version of this worksheet

Fir
nu

he
ds.

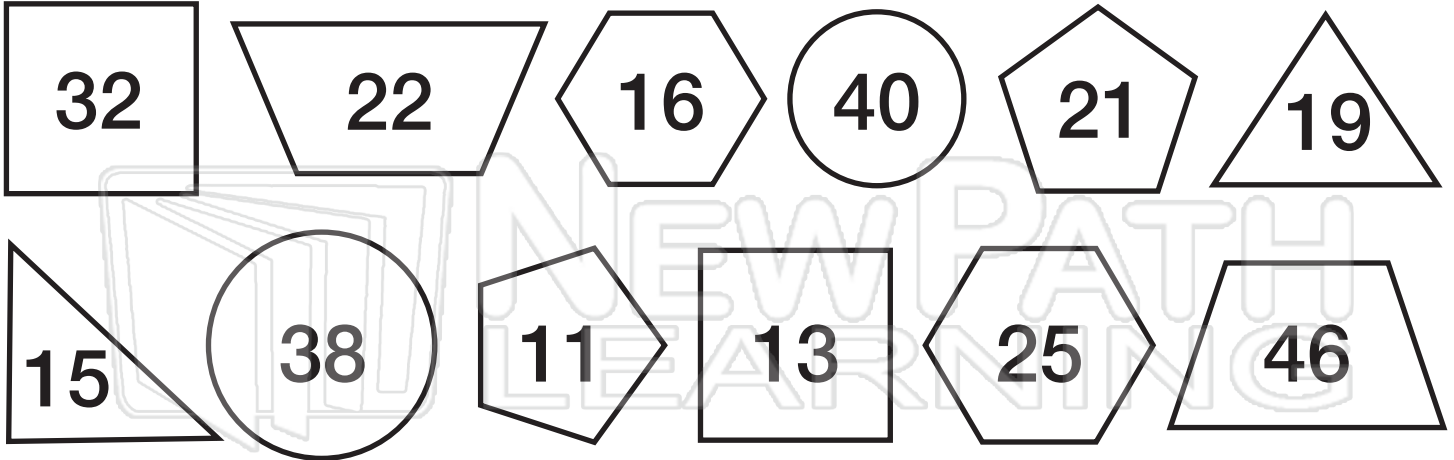


NEW PATH
LEARNING



Name _____ Class _____ Date _____

Multiply the numbers found in the shapes below. Show your work.



Fir
n



he
s.

PREVIEW

Please [Sign In](#) or [Sign Up](#) to download the printable version of this worksheet

Fir
nu

he
ds.

$$\begin{array}{r} 21 \\ \times 11 \\ \hline 21 \\ 21 \\ \hline 231 \end{array}$$

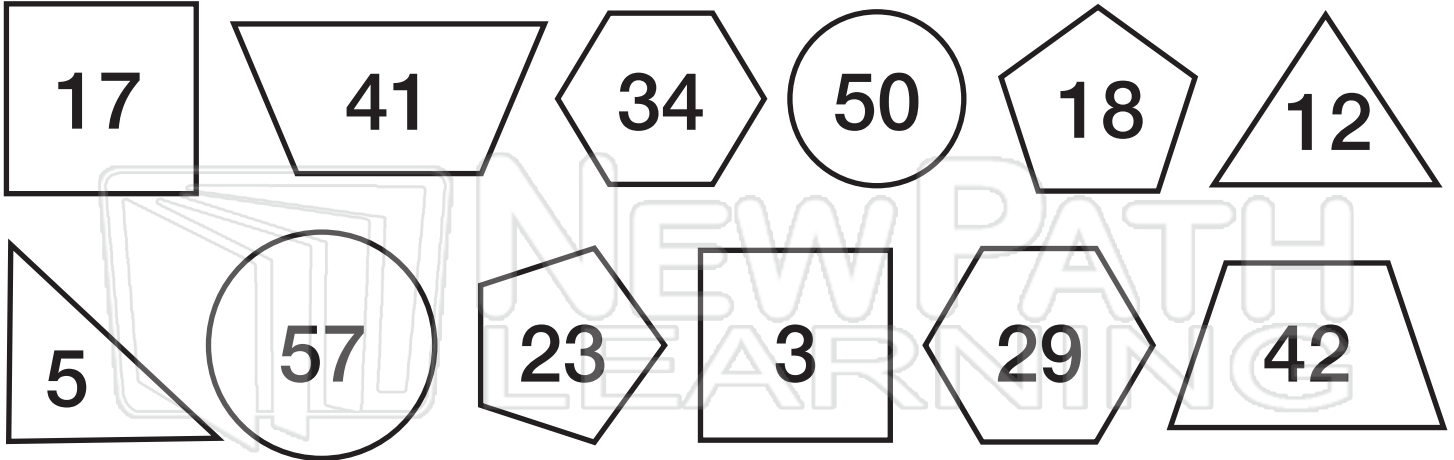
$$\begin{array}{r} 25 \\ \times 16 \\ \hline 150 \\ 25 \\ \hline 400 \end{array}$$

$$\begin{array}{r} 46 \\ \times 22 \\ \hline 92 \\ 92 \\ \hline 1,014 \end{array}$$



Name _____ Class _____ Date _____

Multiply the numbers found in the shapes below. Show your work.



Fir
n



he
s.

PREVIEW

Please [Sign In](#) or [Sign Up](#) to download the printable version of this worksheet

Fir
nu

he
ds.

$$\begin{array}{r} 23 \\ \times 18 \\ \hline 184 \\ 23 \\ \hline 414 \end{array}$$

$$\begin{array}{r} 34 \\ \times 29 \\ \hline 306 \\ 68 \\ \hline 986 \end{array}$$

$$\begin{array}{r} 42 \\ \times 41 \\ \hline 42 \\ 168 \\ \hline 1,722 \end{array}$$