

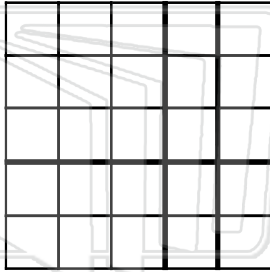


Name _____ Class _____ Date _____


Neil Number, Crazy Charlie and Mary Measure take turns in having each other over after school. Mary suggests they work out who has the biggest back garden.

- ☐ Look at the areas below and calculate the play area in squares for each garden. (i.e. don't include the shed area in Neil's garden.)

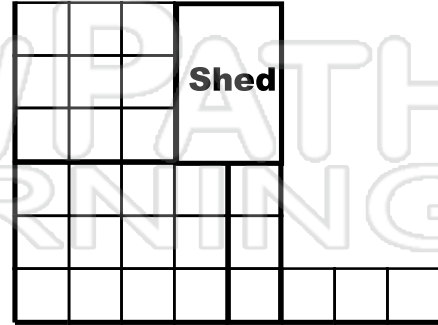
Charlie's Garden



Mary's Garden




Neil's Garden



PREVIEW

Please [Sign In](#) or [Sign Up](#) to download the printable version of this worksheet



4. Mr. Number is going to knock down the old shed in the corner of his garden. What will the new area and perimeter of the garden be once the shed is gone?

.....


.....



Name _____ Class _____ Date _____


Spacy Sam's garden has the largest area of all. It has one side that is 10 meters long, two sides that are both 5 meters each and the perimeter is 34 meters.

Draw Spacy Sam's garden on the grid below:



PREVIEW

Please [Sign In](#) or [Sign Up](#) to download the printable version of this worksheet



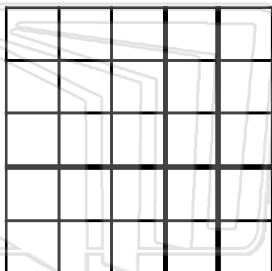


Name _____ Class _____ Date _____


Neil Number, Crazy Charlie and Mary Measure take turns in having each other over after school. Mary suggests they work out who has the biggest back garden.

- ☐ Look at the areas below and calculate the play area in squares for each garden. (i.e. don't include the shed area in Neil's garden.)

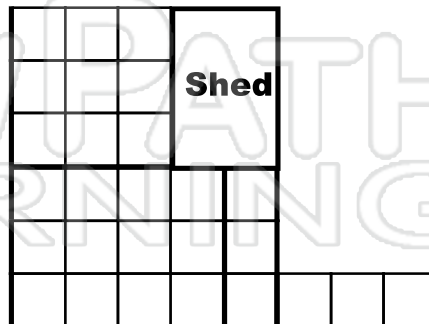
Charlie's Garden



Mary's Garden



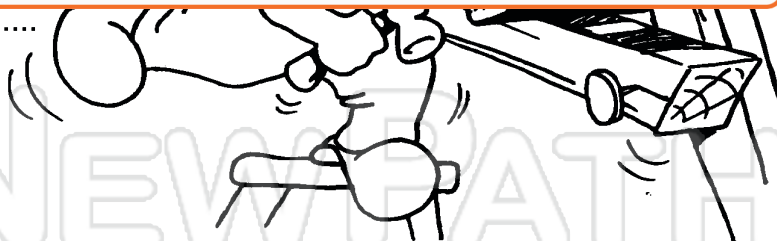
Neil's Garden



PREVIEW

Please [Sign In](#) or [Sign Up](#) to download the printable version of this worksheet

.....
to square meters



4. Mr. Number is going to knock down the old shed in the corner of his garden. What will the new area and perimeter of the garden be once the shed is gone?


.....
Area - 33 square meters, Perimeter - 28 meters



Name _____ Class _____ Date _____

Spacy Sam's garden has the largest area of all. It has one side that is 10 meters long, two sides that are both 5 meters each and the perimeter is 34 meters.

Draw Spacy Sam's garden on the grid below: *Answers will vary.*



PREVIEW

Please [Sign In](#) or [Sign Up](#) to download the printable version of this worksheet

