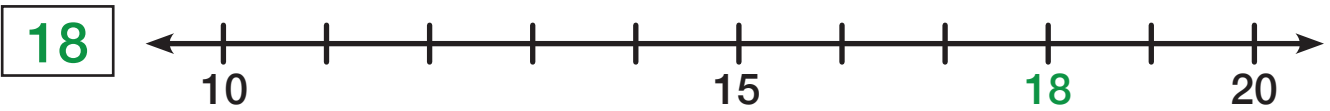




Name _____ Class _____ Date _____

Find where the number is on the number line and label it. Then answer the questions.



Is 18 closer to 10 or 20? _____ Round 18 to the nearest 10 _____



Is 12 closer to 10 or 20? _____ Round 12 to the nearest 10 _____



Is 26 _____



Is 37 _____

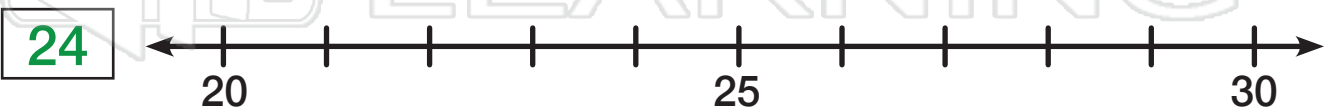
PREVIEW

Please [Sign In](#) or [Sign Up](#) to download the printable version of this worksheet

Is 19 _____



Is 51 closer to 50 or 60? _____ Round 51 to the nearest 10 _____

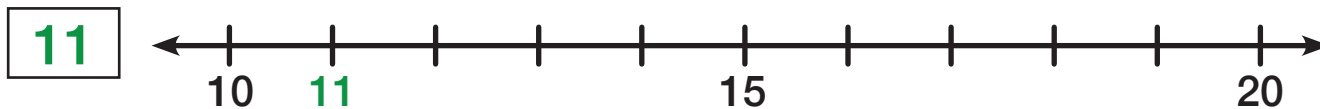


Is 24 closer to 20 or 30? _____ Round 24 to the nearest 10 _____



Name _____ Class _____ Date _____

Find where the number is on the number line and label it. Then answer the questions.



Is 11 closer to 10 or 20? _____ Round 11 to the nearest 10 _____



Is 28 closer to 20 or 30? _____ Round 28 to the nearest 10 _____



Is 33 closer to 30 or 40? _____ Round 33 to the nearest 10 _____



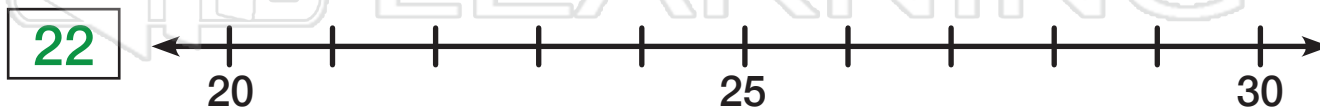
Is 57 closer to 50 or 60? _____ Round 57 to the nearest 10 _____



Is 42 closer to 40 or 50? _____ Round 42 to the nearest 10 _____



Is 54 closer to 50 or 60? _____ Round 54 to the nearest 10 _____

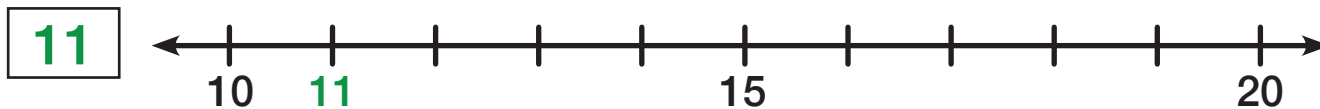


Is 22 closer to 20 or 30? _____ Round 22 to the nearest 10 _____



Name _____ Class _____ Date _____

Find where the number is on the number line and label it. Then answer the questions.



Is 11 closer to 10 or 20? _____ Round 11 to the nearest 10 _____



Is 28 closer to 20 or 30? _____ Round 28 to the nearest 10 _____



Is 33 closer to 30 or 40? _____ Round 33 to the nearest 10 _____



Is 57 closer to 50 or 60? _____ Round 57 to the nearest 10 _____



Is 42 closer to 40 or 50? _____ Round 42 to the nearest 10 _____



Is 54 closer to 50 or 60? _____ Round 54 to the nearest 10 _____

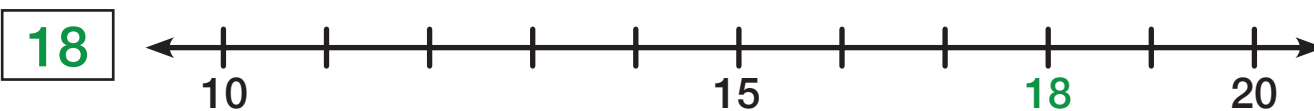


Is 22 closer to 20 or 30? _____ Round 22 to the nearest 10 _____



Name _____ Class _____ Date _____

Find where the number is on the number line and label it. Then answer the questions.



Is 18 closer to 10 or 20? 20 Round 18 to the nearest 10 20



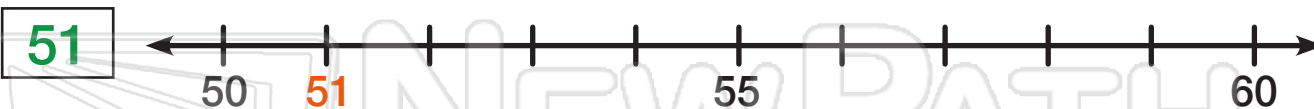
Is 12 closer to 10 or 20? 10 Round 12 to the nearest 10 10



Is 26 closer to 30 or 40? 30 Round 26 to the nearest 10 30

PREVIEW

Please [Sign In](#) or [Sign Up](#) to download the printable version of this worksheet



Is 51 closer to 50 or 60? 50 Round 51 to the nearest 10 50



Is 24 closer to 20 or 30? 20 Round 24 to the nearest 10 20

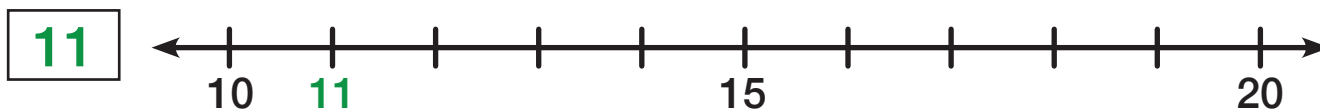


Rounding to the Nearest 10

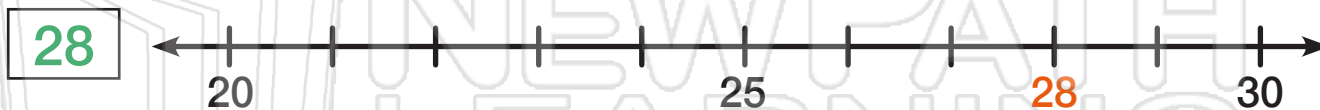
Math

Name _____ Class _____ Date _____

Find where the number is on the number line and label it. Then answer the questions.



Is 11 closer to 10 or 20? 10 Round 11 to the nearest 10 10



Is 28 closer to 20 or 30? 30 Round 28 to the nearest 10 30



Is 33 closer to 30 or 40? 30 Round 33 to the nearest 10 30



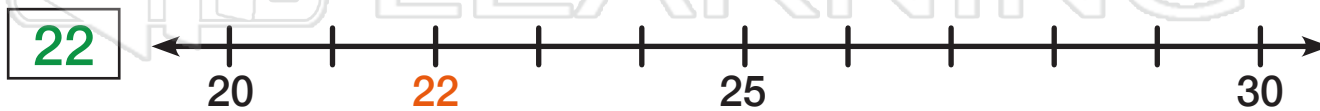
Is 57 closer to 50 or 60? 60 Round 57 to the nearest 10 60



Is 42 closer to 40 or 50? 40 Round 42 to the nearest 10 40



Is 54 closer to 50 or 60? 50 Round 54 to the nearest 10 50



Is 22 closer to 20 or 30? 20 Round 22 to the nearest 10 20



Rounding to the Nearest 10

Math

Name _____ Class _____ Date _____

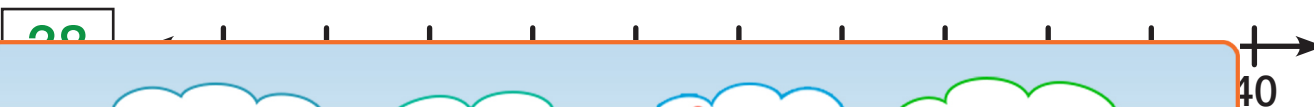
Find where the number is on the number line and label it. Then answer the questions.



Is 56 closer to 50 or 60? 60 Round 56 to the nearest 10 60



Is 27 closer to 20 or 30? 30 Round 27 to the nearest 10 30



Is 38



Is 51

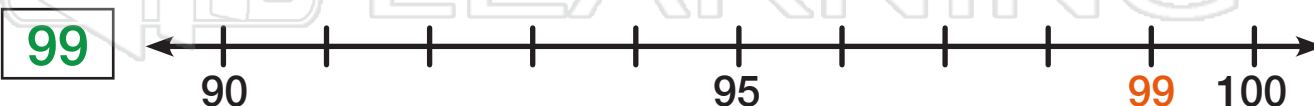
PREVIEW

Please [Sign In](#) or [Sign Up](#) to download the printable version of this worksheet

Is 49



Is 74 closer to 50 or 60? 70 Round 74 to the nearest 10 70



Is 99 closer to 90 or 100? 100 Round 99 to the nearest 10 100