



Name _____ Class _____ Date _____

Round the decimals to the nearest integer. If a number is < 5 then round the number down, if it is ≥ 5 then round the number up. Use the number lines to help answer the questions.



Mark 11.8 on the number line. Round 11.8 to the nearest integer. _____

Mark 12.4 on the number line. Round 12.4 to the nearest integer. _____

Mark 13.5 on the number line. Round 13.5 to the nearest integer. _____

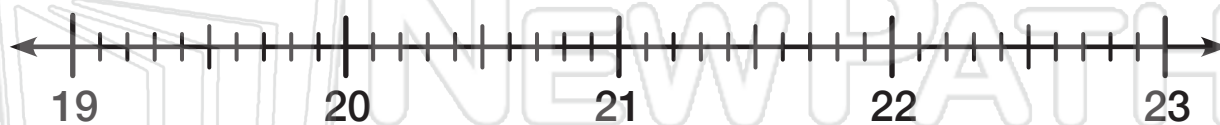
Mark
Mark
Mark

PREVIEW

Please [Sign In](#) or [Sign Up](#) to download the printable version of this worksheet

Mark
Mark

Mark 22.3 on the number line. Round 22.3 to the nearest integer. _____



Mark 21.8 on the number line. Round 21.8 to the nearest integer. _____

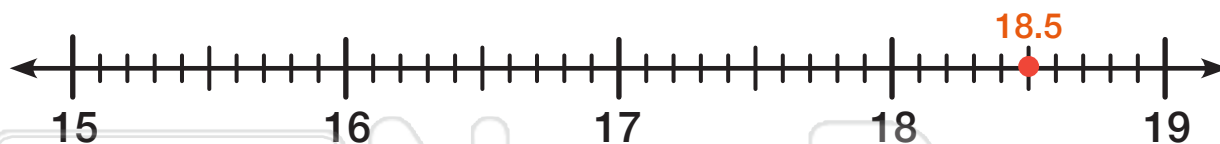
Mark 22.9 on the number line. Round 22.9 to the nearest integer. _____

Mark 20.2 on the number line. Round 20.2 to the nearest integer. _____



Name _____ Class _____ Date _____


Round the decimals to the nearest integer. If a number is < 5 then round the number down, if it is ≥ 5 then round the number up. Use the number lines to help answer the questions.



Mark 18.5 on the number line. Round 18.5 to the nearest integer. _____

Mark 17.4 on the number line. Round 17.4 to the nearest integer. _____

Mark 18.1 on the number line. Round 18.1 to the nearest integer. _____



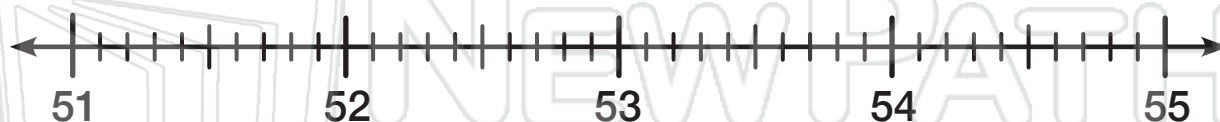
Mark
Mark
Mark

PREVIEW

Please [Sign In](#) or [Sign Up](#) to download the printable version of this worksheet

Mark
Mark

Mark 34.6 on the number line. Round 34.6 to the nearest integer. _____



Mark 51.5 on the number line. Round 51.5 to the nearest integer. _____

Mark 52.9 on the number line. Round 52.9 to the nearest integer. _____

Mark 54.6 on the number line. Round 54.6 to the nearest integer. _____



Name _____ Class _____ Date _____

Round the decimals to the nearest integer. If a number is < 5 then round the number down, if it is ≥ 5 then round the number up. Use the number lines to help answer the questions.



Mark 11.8 on the number line. Round 11.8 to the nearest integer. 12

Mark 12.4 on the number line. Round 12.4 to the nearest integer. 12

Mark 13.5 on the number line. Round 13.5 to the nearest integer. 14



Mark

Mark

Mark



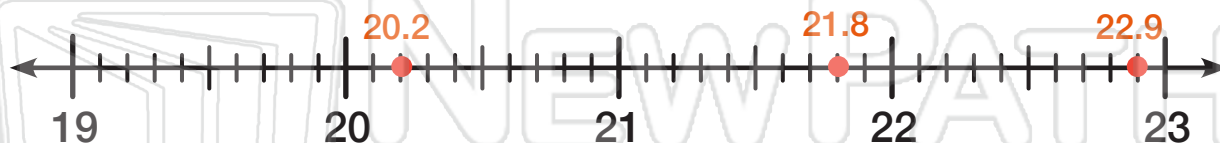
PREVIEW

Please [Sign In](#) or [Sign Up](#) to download the printable version of this worksheet

Mark

Mark

Mark 22.3 on the number line. Round 22.3 to the nearest integer. 22



Mark 21.8 on the number line. Round 21.8 to the nearest integer. 22

Mark 22.9 on the number line. Round 22.9 to the nearest integer. 23

Mark 20.2 on the number line. Round 20.2 to the nearest integer. 20

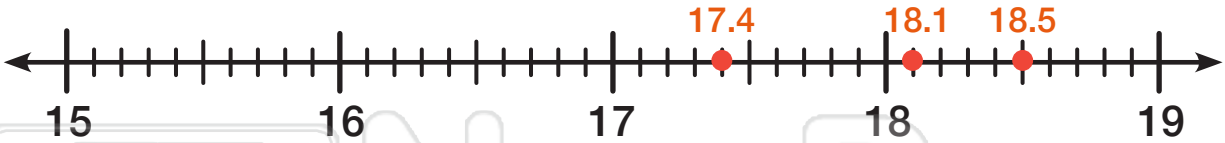


Rounding to the Nearest Whole Number

Math

Name _____ Class _____ Date _____

Round the decimals to the nearest integer. If a number is < 5 then round the number down, if it is ≥ 5 then round the number up. Use the number lines to help answer the questions.



Mark 18.5 on the number line. Round 18.5 to the nearest integer. 19

Mark 17.4 on the number line. Round 17.4 to the nearest integer. 17

Mark 18.1 on the number line. Round 18.1 to the nearest integer. 18



Mark

Mark

Mark



PREVIEW

Please [Sign In](#) or [Sign Up](#) to download the printable version of this worksheet

Mark

Mark

Mark 34.6 on the number line. Round 34.6 to the nearest integer. 35



Mark 51.5 on the number line. Round 51.5 to the nearest integer. 52

Mark 52.9 on the number line. Round 52.9 to the nearest integer. 53

Mark 54.6 on the number line. Round 54.6 to the nearest integer. 55