



Name \_\_\_\_\_ Class \_\_\_\_\_ Date \_\_\_\_\_

## ● How much time has passed between ...

1) 4:00 p.m. to 7:00 p.m.? \_\_\_\_\_

2) 2:00 p.m. to 10:00 p.m.? \_\_\_\_\_

3) 2:00 a.m. to 6:00 a.m.? \_\_\_\_\_


4) 3:00 p.m. to 11 p.m.? \_\_\_\_\_

5) 7:00 p.m. to midnight? \_\_\_\_\_

6) 6:30 a.m. to 7:30 a.m.? \_\_\_\_\_

7) 5:00 p.m. to 8:30 p.m.? \_\_\_\_\_

8) 8:30 a.m. to 12:00 p.m.? \_\_\_\_\_



## PREVIEW

Please [Sign In](#) or [Sign Up](#) to download the printable version of this worksheet

19) 2:05 a.m. to 2:40 a.m.? \_\_\_\_\_

20) 3:20 p.m. to 3:40 p.m.? \_\_\_\_\_

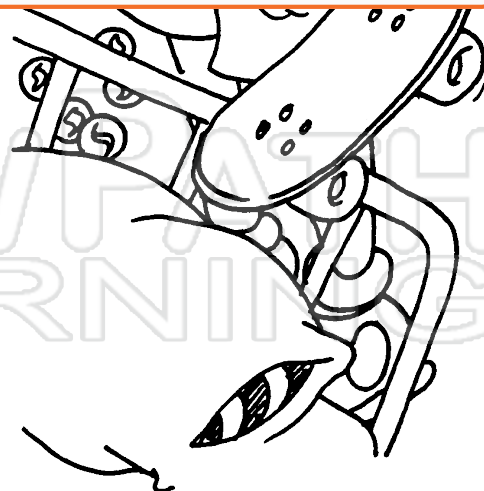
21) 8:45 a.m. to 9:15 a.m.? \_\_\_\_\_

22) 3:10 p.m. to 4:20 p.m.? \_\_\_\_\_

23) 7:50 p.m. to 8:30 p.m.? \_\_\_\_\_

24) 10:40 a.m. to 12:10 p.m.? \_\_\_\_\_

25) 7:55 a.m. to 1:25 p.m.? \_\_\_\_\_






Name \_\_\_\_\_ Class \_\_\_\_\_ Date \_\_\_\_\_

## ● How much time has passed between ...

- 1) 4:00 p.m. to 7:00 p.m.? 3 hours
- 2) 2:00 p.m. to 10:00 p.m.? 8 hours
- 3) 2:00 a.m. to 6:00 a.m.? 4 hours
- 4) 3:00 p.m. to 11 p.m.? 8 hours
- 5) 7:00 p.m. to midnight? 5 hours
- 6) 6:30 a.m. to 7:30 a.m.? 1 hour
- 7) 5:00 p.m. to 8:30 p.m.? 3 hours 30 min
- 8) 8:30 a.m. to 12:00 p.m.? 3 hours 30 min



## PREVIEW

Please [Sign In](#) or [Sign Up](#) to download the printable version of this worksheet

- 19) 2:05 a.m. to 2:40 a.m.? 35 min
- 20) 3:20 p.m. to 3:40 p.m.? 20 min
- 21) 8:45 a.m. to 9:15 a.m.? 30 min
- 22) 3:10 p.m. to 4:20 p.m.? 1 hour 10 min
- 23) 7:50 p.m. to 8:30 p.m.? 40 min
- 24) 10:40 a.m. to 12:10 p.m.? 1 hour 30 min
- 25) 7:55 a.m. to 1:25 p.m.? 5 hours 30 min

