





Name \_\_\_\_\_ Class \_\_\_\_\_ Date \_\_\_\_\_

- Express the times these clocks are showing in 24 hour clock terms. (Note whether they are a.m. or p.m.)

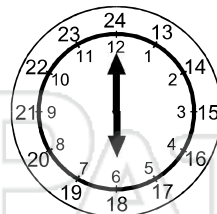


p.m.

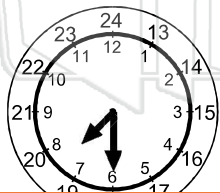
1700



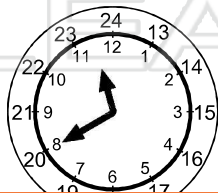
a.m.




p.m.



p.m.



a.m.

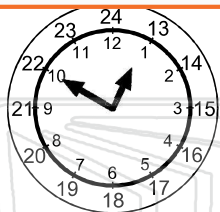


p.m.

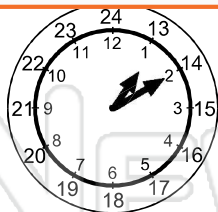


## PREVIEW

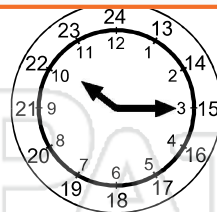
Please [Sign In](#) or [Sign Up](#) to download the printable version of this worksheet



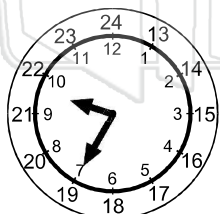
p.m.



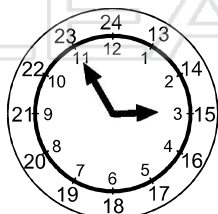
p.m.




p.m.



a.m.



p.m.

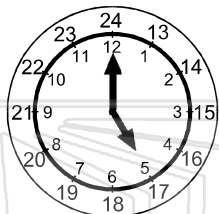


a.m.



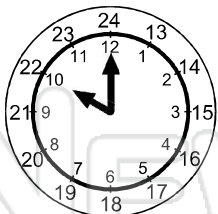
Name \_\_\_\_\_ Class \_\_\_\_\_ Date \_\_\_\_\_

● Express the times these clocks are showing in 24 hour clock terms. (Note whether they are a.m. or p.m.)



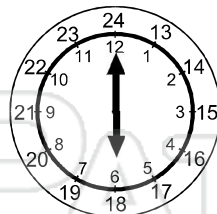
p.m.

1700



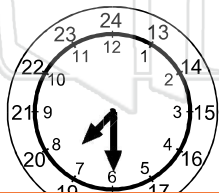
a.m.

1000



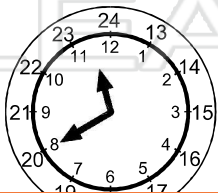
p.m.

1800



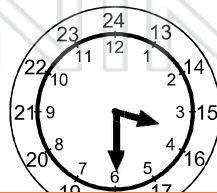
p.m.

1930



a.m.

1140



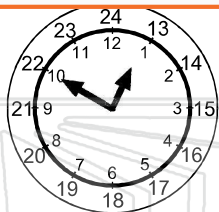
p.m.

1530



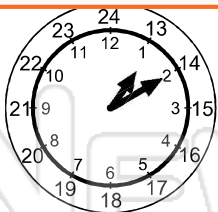
## PREVIEW

Please [Sign In](#) or [Sign Up](#) to download the printable version of this worksheet



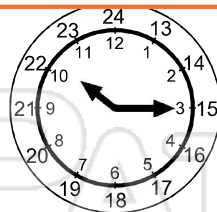
p.m.

1250



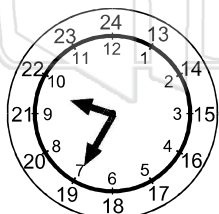
p.m.

1310



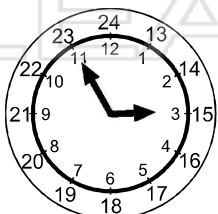
p.m.

2215




a.m.

0935



p.m.

1455



a.m.

0145