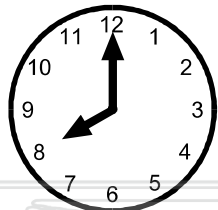





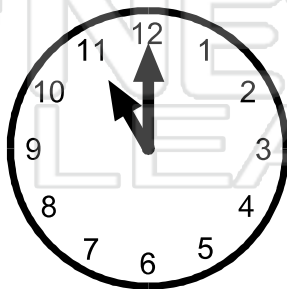
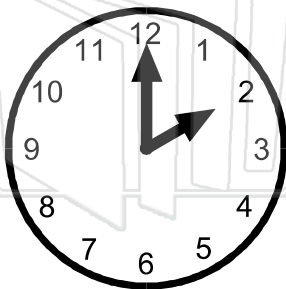
Name _____ Class _____ Date _____



This clock says **8 o'clock** or **8:00**.

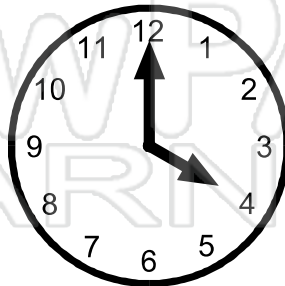
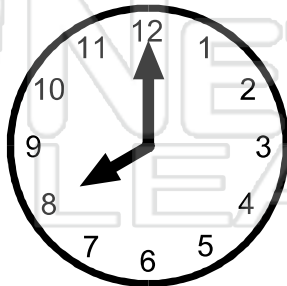
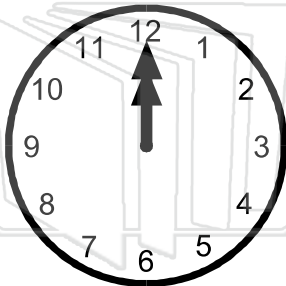
On the hour, the long hand always points to the 12 on the clock. The short hand points to the hour.

● **What times are these clocks showing?**



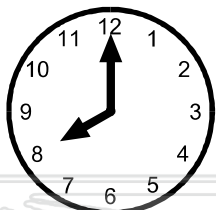
PREVIEW

Please [Sign In](#) or [Sign Up](#) to download the printable version of this worksheet






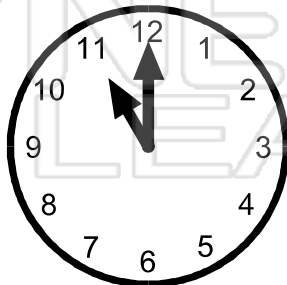
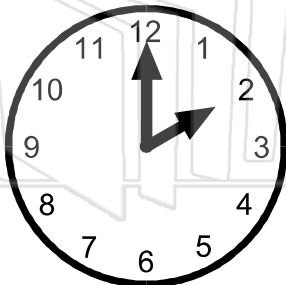
Name _____ Class _____ Date _____



This clock says **8 o'clock** or **8:00**.

On the hour, the long hand always points to the 12 on the clock. The short hand points to the hour.

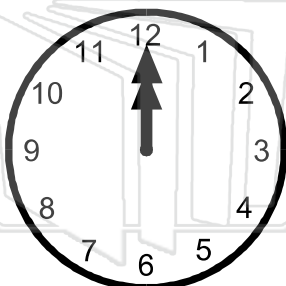
● **What times are these clocks showing?**



PREVIEW

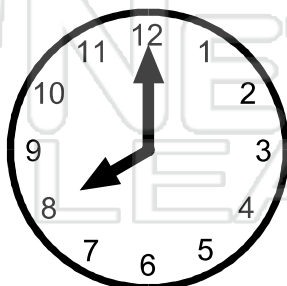
Please [Sign In](#) or [Sign Up](#) to download the printable version of this worksheet

5:00



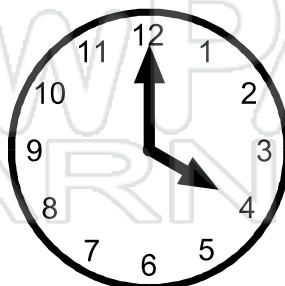
12:00

10:00



8:00

3:00



4:00