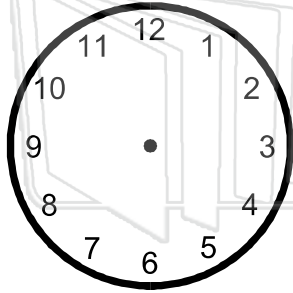


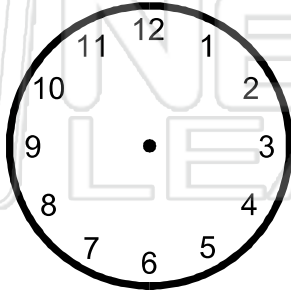


Name \_\_\_\_\_ Class \_\_\_\_\_ Date \_\_\_\_\_


● Draw the times on the clock faces.



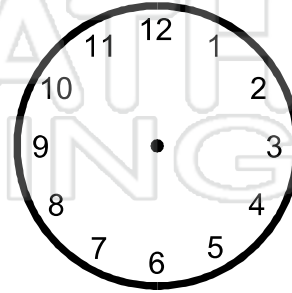
9:00



5:30



2:30



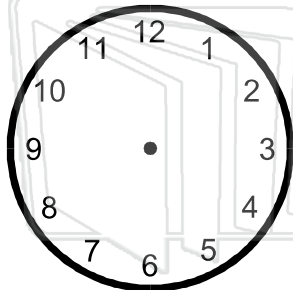
7 o'clock



## PREVIEW


Please [Sign In](#) or [Sign Up](#) to download the printable version of this worksheet

12 o'clock



11:30

4:00



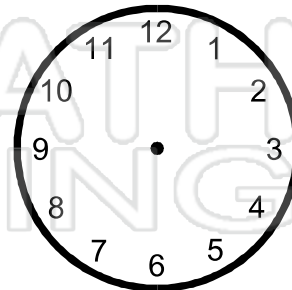
4:30

half past 8



half past 3

6:30

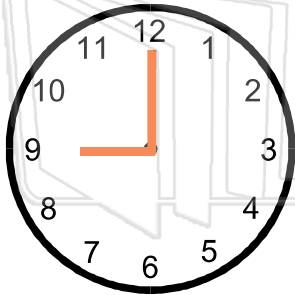


half past 12



Name \_\_\_\_\_ Class \_\_\_\_\_ Date \_\_\_\_\_

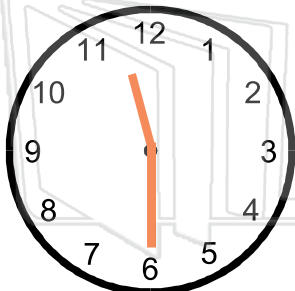
● Draw the times on the clock faces.



## PREVIEW

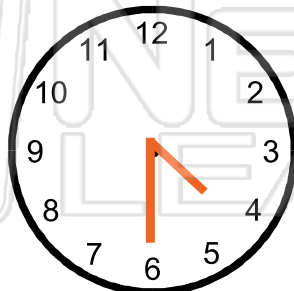
Please [Sign In](#) or [Sign Up](#) to download the printable version of this worksheet

**12 o'clock**



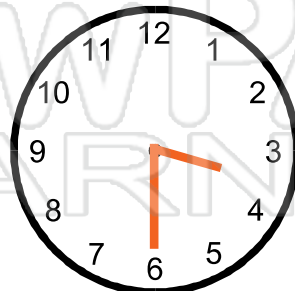
**11:30**

**4:00**



**4:30**

**half past 8**



**half past 3**

**6:30**



**half past 12**