



Name _____ Class _____ Date _____

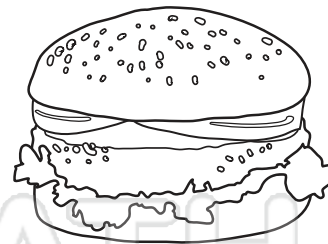
Estimate how much each item weighs. Circle your answer.



- 10 grams
- 142 grams
- 7.2 kilograms




- 300 grams
- 2.7 kilograms
- 6 kilograms



- 8 grams
- 27 grams
- 227 grams

PREVIEW

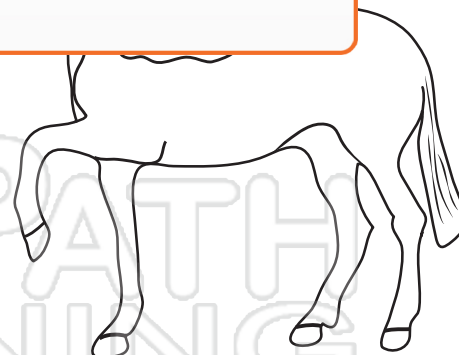
Please [Sign In](#) or [Sign Up](#) to download the printable version of this worksheet



- 245 grams
- 4.5 kilograms
- 45 kilogram



- 186 grams
- 215 grams
- 6.8 kilograms




- 5,420 grams
- 620 kilograms
- 1,991 kilograms



Name _____ Class _____ Date _____

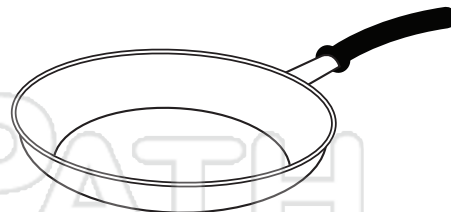
Estimate how much each item weighs. Circle your answer.



- 85 grams
- 412 grams
- 800 grams



- 37 grams
- 340 grams
- 0.8 kilogram




- 10 grams
- 168 grams
- 2 kilograms




PREVIEW

Please [Sign In](#) or [Sign Up](#) to download the printable version of this worksheet



- 173 grams
- 3.7 kilograms
- 13.7 kilogram



- 1,500 grams
- 2.1 kilograms
- 12 kilograms




- 0.8 grams
- 8 grams
- 18 kilogram



Name _____ Class _____ Date _____

Estimate how much each item weighs. Circle your answer.

1 pound = 16 ounces
1 pound \approx 454 grams
1 ounce \approx 28.4 grams
1 kilogram = 1,000 grams



15 ounces
120 kilograms
15 pounds



1 ounce
2 grams
1 pound



40 grams
454 grams
1 kilogram



PREVIEW

Please [Sign In](#) or [Sign Up](#) to download the printable version of this worksheet



1.3 pounds
3.9 kilograms
13 kilograms



4,500 grams
480 pounds
82 kilograms




2 ounces
15 grams
255 grams



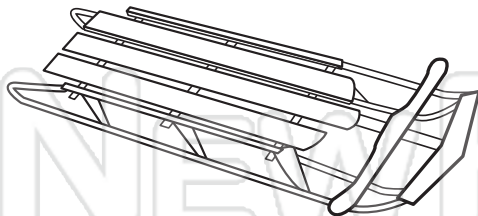
Name _____ Class _____ Date _____

Estimate how much each item weighs. Circle your answer.

1 pound = 16 ounces
1 pound \approx 454 grams
1 ounce \approx 28.4 grams
1 kilogram = 1,000 grams



10 ounces
125 grams
2.5 pounds



37 ounces
15 pounds
72 pounds




6 grams
60 grams
2 ounces




PREVIEW

Please [Sign In](#) or [Sign Up](#) to download the printable version of this worksheet



72 grams
10.3 ounces
83 ounces



800 kilograms
750 pounds
2,560 pounds



24 ounces
152 grams
455 grams



Name _____ Class _____ Date _____

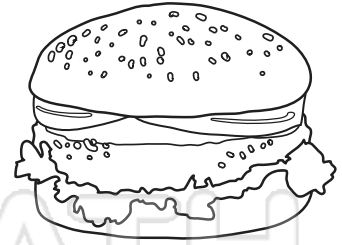
Estimate how much each item weighs. Circle your answer.



- 10 grams
- 142 grams
- 7.2 kilograms



- 300 grams
- 2.7 kilograms
- 6 kilograms



- 8 grams
- 27 grams
- 227 grams

PREVIEW

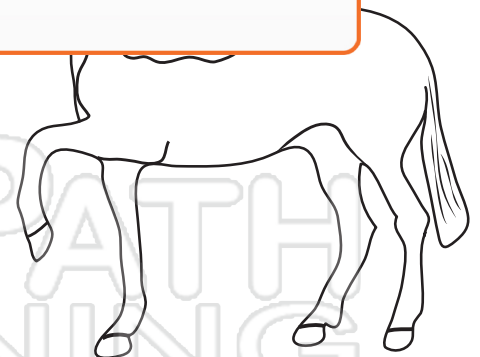
Please Sign In or Sign Up to download the printable version of this worksheet



- 245 grams
- 4.5 kilograms
- 45 kilogram



- 186 grams
- 215 grams
- 6.8 kilograms

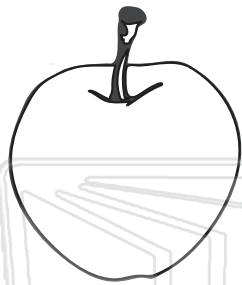


- 5,420 grams
- 620 kilograms
- 1,991 kilograms



Name _____ Class _____ Date _____

Estimate how much each item weighs. Circle your answer.



85 grams

412 grams

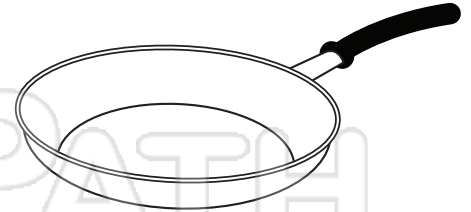
800 grams



37 grams

340 grams

0.8 kilogram



10 grams


168 grams

2 kilograms



PREVIEW


Please [Sign In](#) or [Sign Up](#) to download the printable version of this worksheet



173 grams

3.7 kilograms

13.7 kilogram



1,500 grams

2.1 kilograms

12 kilograms



0.8 grams

8 grams


18 kilogram



Name _____ Class _____ Date _____

Estimate how much each item weighs. Circle your answer.

1 pound = 16 ounces
1 pound \approx 454 grams
1 ounce \approx 28.4 grams
1 kilogram = 1,000 grams



- 15 ounces
- 120 kilograms
- 15 pounds**



- 1 ounce**
- 2 grams
- 1 pound



- 40 grams
- 454 grams**
- 1 kilogram



PREVIEW

Please [Sign In](#) or [Sign Up](#) to download the printable version of this worksheet



- 1.3 pounds
- 3.9 kilograms**
- 13 kilograms



- 4,500 grams
- 480 pounds**
- 82 kilograms




- 2 ounces
- 15 grams
- 255 grams**



Name _____ Class _____ Date _____

Estimate how much each item weighs. Circle your answer.

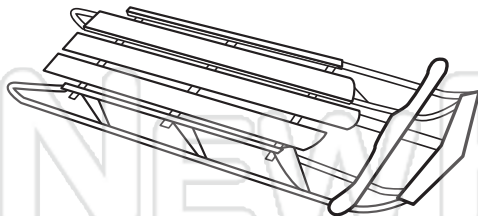
1 pound = 16 ounces
1 pound \approx 454 grams
1 ounce \approx 28.4 grams
1 kilogram = 1,000 grams



10 ounces

125 grams

2.5 pounds



37 ounces

15 pounds

72 pounds



6 grams


60 grams

2 ounces



PREVIEW


Please [Sign In](#) or [Sign Up](#) to download the printable version of this worksheet



72 grams

10.3 ounces

83 ounces



800 kilograms

750 pounds

2,560 pounds



24 ounces

152 grams

455 grams