



Name _____ Class _____ Date _____

Plants are living things. Plants need **water**, **air**, **nutrients** and **sunlight** to grow. Different parts of a plant help the plant to live.



Flowers

The **flower** makes **seeds**. New plants grow from these seeds.

Stem

Stems **carry water** and **nutrients** to the leaves. Stems help the plant stand up straight and tall to reach sunlight.



PREVIEW

Please [Sign In](#) or [Sign Up](#) to download the printable version of this worksheet

A **li** changes overtime.




seed



seedling



young plant



adult plant



Name _____ Class _____ Date _____

Color the plant. Label the plant parts.



PREVIEW

Please [Sign In](#) or [Sign Up](#) to download the printable version of this worksheet





All About Plants

Sci
B


Name _____ Class _____ Date _____

Some plants have flowers, some don't. Circle the plants that **grow flowers**.

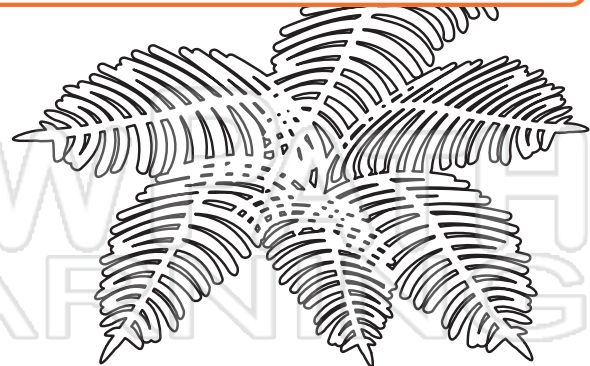


PREVIEW

Please [Sign In](#) or [Sign Up](#) to download the printable version of this worksheet



fruit tree



fern



All About Plants

Sci
B

Name _____ Class _____ Date _____

Color parts of the plant life cycle, then cut them out. Make a chart showing the **life cycle** in order.



PREVIEW

Please [Sign In](#) or [Sign Up](#) to download the printable version of this worksheet





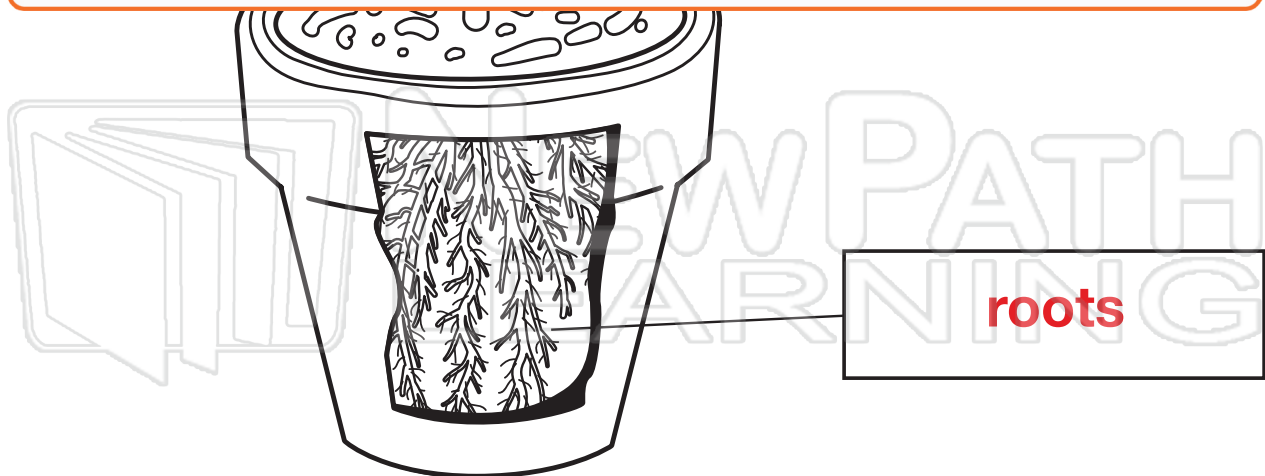
Answer Key

Color the plant. Label the plant parts.



PREVIEW


Please [Sign In](#) or [Sign Up](#) to download the printable version of this worksheet





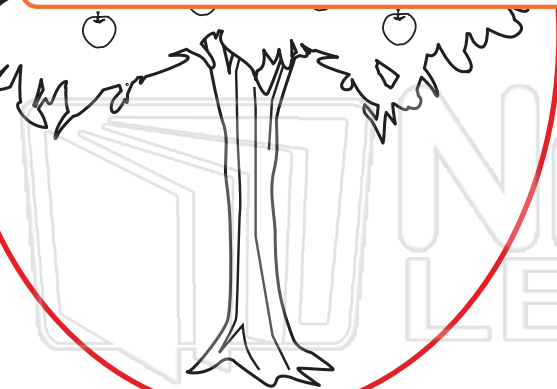
Answer Key

Some plants have flowers, some don't. Circle the plants that grow flowers.



PREVIEW

Please [Sign In](#) or [Sign Up](#) to download the printable version of this worksheet



fruit tree

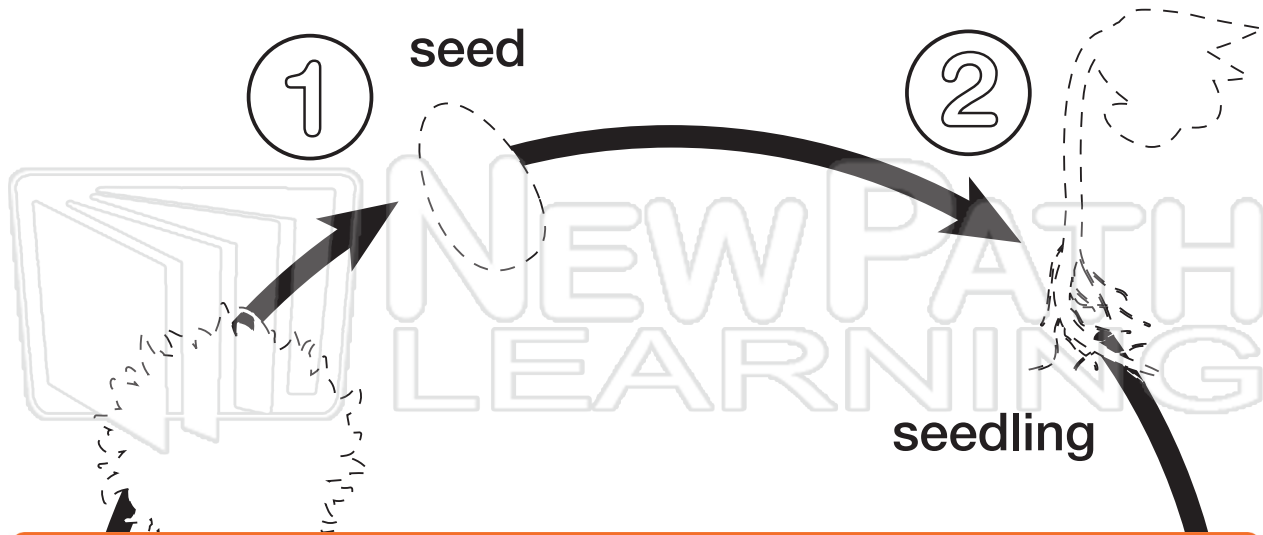


fern



Answer Key - Example

Plant life cycle in order.



PREVIEW

Please [Sign In](#) or [Sign Up](#) to download the printable version of this worksheet

