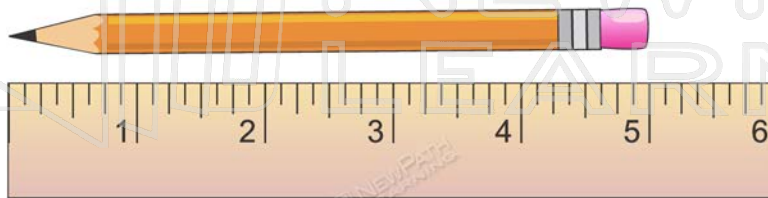


MEASUREMENT

Measuring to the nearest inch:



This pencil is 5 inches in length.

Me



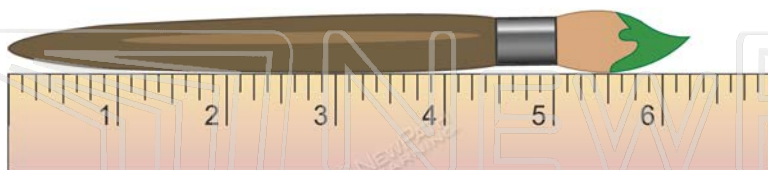
This



PREVIEW

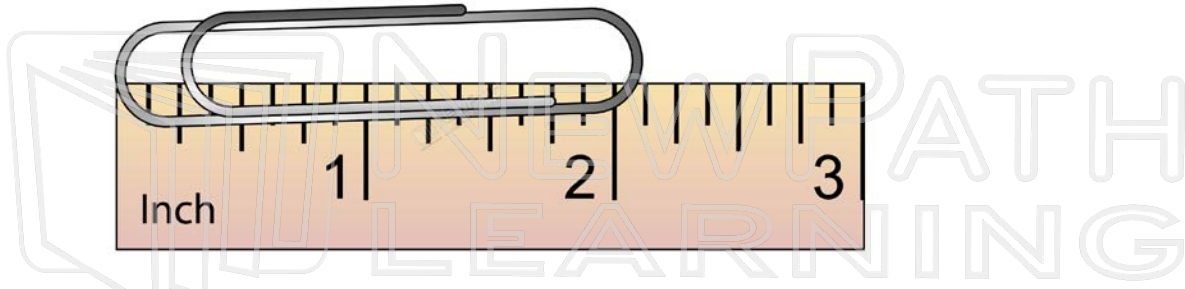
Please [Sign In](#) or [Sign Up](#) to download the printable version of this worksheet

Measuring to the nearest $\frac{1}{4}$ inch:



This paint brush is $6 \frac{1}{4}$ inches in length.

Measuring to the nearest $\frac{1}{8}$ inch:



This paper clip is $2 \frac{1}{8}$ inches in length.



PREVIEW

Please [Sign In](#) or [Sign Up](#) to download the printable version of this worksheet