


# ELECTROMAGNETISM

## Overview

The production of a magnetic field around an electrical current is called **electromagnetism**. This is shown in the diagram below.

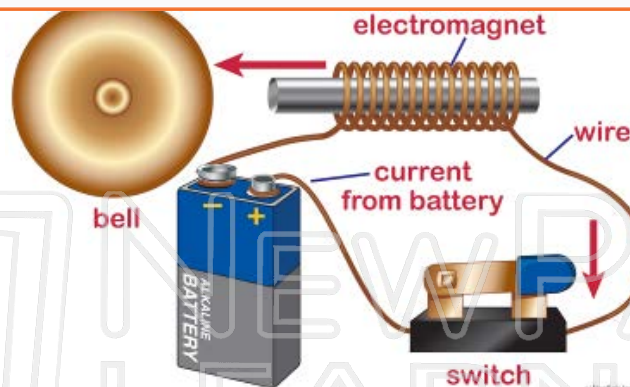


## PREVIEW

Please [Sign In](#) or [Sign Up](#) to download the printable version of this worksheet

The  
elec  
diag

e  
ell.



The magnetic field produced here when the circuit is closed is a combination of the magnetic force from the electrical current and the metal bar. Opening the circuit reduces the strength of the magnetic field and stops the clapper from striking the bell.

In junkyards, large electromagnets held by cranes are used to lift heavy loads of metal. When current is flowing the metal is lifted and when current stops flowing, the metal drops off the magnet.



Ma  
The  
caus  
into

The  
prin  
pola  
exis  
the

an appliance like an electric drill.



can

## PREVIEW

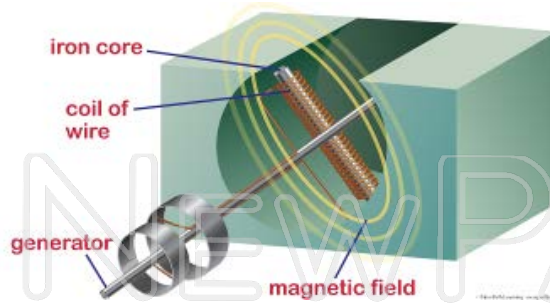
Please [Sign In](#) or [Sign Up](#) to download the printable version of this worksheet

e  
f  
in

### **LESSON CHECKPOINT:** **How does an electric motor work?**

#### **Induction**

A **generator** works in an opposite manner from a motor. By moving a conductor through a magnetic field, induced electricity is produced by **induction**. In this activity, mechanical energy is converted to electrical energy. In the diagram below, we see induction occurring in two different ways:



Generators produce almost all of our electricity. By burning coal, oil or natural gas, large amounts of water are converted to steam which provides the mechanical energy needed to turn the generators. In some cases, falling water alone is enough to do this job.

### LESSON CHECKPOINT

Ma  
Tra  
that  
that



ose  
se

## PREVIEW

Please [Sign In](#) or [Sign Up](#) to download the printable version of this worksheet

curr

primary coil

secondary coil

primary coil

secondary coil

Without transformers, getting electricity from power plants to our homes would be impossible. Coming out of large generators, voltages first have to be increased to be carried over long distances. When it nears our homes, these high voltages have to be reduced to safely enter and then work our appliances.

### LESSON CHECKPOINT:

**What are the two types of transformers and what does each type do?**