



Name _____ Class _____ Date _____

Match each of the following terms to its definition:

Fraction

Half-circle

One half

Equal groups

Equal shares

Halves

One fourth

One third

1. _____ - groups that have the same number of objects or things



2. _____ - equal parts of a whole

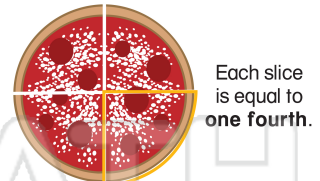


3. _____
4. _____
5. _____
two e

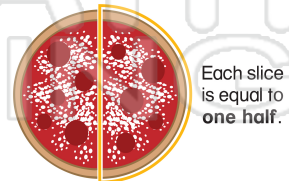
PREVIEW

Please [Sign In](#) or [Sign Up](#) to download
the printable version of this worksheet

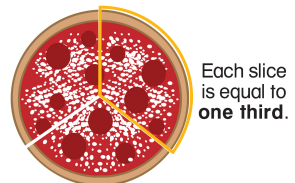
6. _____ - one for four equal parts



7. _____ - one of two equal parts



8. _____ - one of three equal parts





ANSWER KEY

Match each of the following terms to its definition:

Fraction

Half-circle

One half

Equal groups

Equal shares

Halves

One fourth

One third

1. **Equal groups** - groups that have the same number of objects or things



2. **Equal shares** - equal parts of a whole



3. Fr



4. Ha

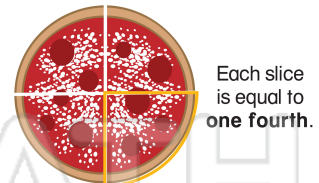
PREVIEW

5. Ha

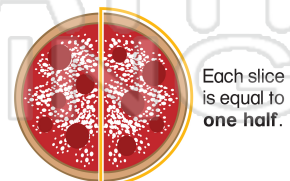
equa

Please [Sign In](#) or [Sign Up](#) to download the printable version of this worksheet

6. **One fourth** - one for four equal parts



7. **One half** - one of two equal parts



8. **One third** - one of three equal parts

