



Name \_\_\_\_\_ Class \_\_\_\_\_ Date \_\_\_\_\_

Match each of the following terms to its definition:

One third

One half

Quarter-circle

Whole

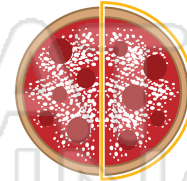
Unequal parts

One twelfth

Equal groups

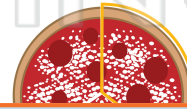
Equal shares

1. \_\_\_\_\_ - one of two equal parts



Each slice is equal to one half.

2. \_\_\_\_\_ - one of three equal parts



Each slice is equal to

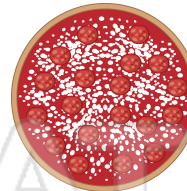


4. \_\_\_\_\_


## PREVIEW

Please [Sign In](#) or [Sign Up](#) to download the printable version of this worksheet

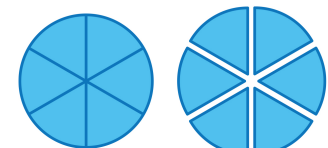
6. \_\_\_\_\_ - an entire or total quantity; all parts



7. \_\_\_\_\_ - groups that have the same number of objects or things



8. \_\_\_\_\_ - equal parts of a whole



6 equal shares



## ANSWER KEY

Match each of the following terms to its definition:

One third

One half

Quarter-circle

Whole

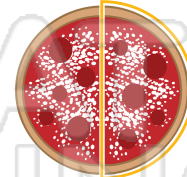
Unequal parts

One twelfth

Equal groups

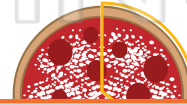
Equal shares

1. **One half** - one of two equal parts



Each slice is equal to **one half**.

2. **One third** - one of three equal parts



Each slice is equal to

3. Or



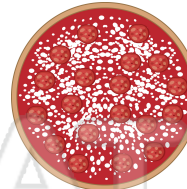
4. Qu

## PREVIEW


5. Ur

Please [Sign In](#) or [Sign Up](#) to download the printable version of this worksheet

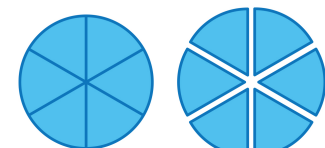
6. **Whole** - an entire or total quantity; all parts



7. **Equal groups** - groups that have the same number of objects or things



8. **Equal shares** - equal parts of a whole



6 equal shares