



Name \_\_\_\_\_ Class \_\_\_\_\_ Date \_\_\_\_\_

Match each of the following terms to its definition:

Bar graph

Scale

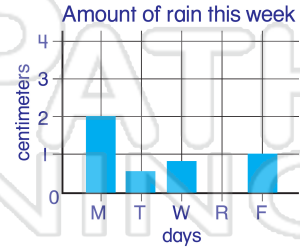
Line graph

Interval

Circle graph

Pictograph

1. \_\_\_\_\_ - a graph that uses the height or length of rectangles to compare data



2. \_\_\_\_\_ - a graph that uses segments of a circle to represent

Student Grades



3. \_\_\_\_\_ the

## PREVIEW

Please [Sign In](#) or [Sign Up](#) to download the printable version of this worksheet

4. \_\_\_\_\_ time

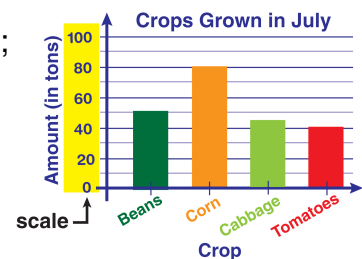


5. \_\_\_\_\_ - a graph drawn using pictures to represent a quantity or amount



= 1 game

6. \_\_\_\_\_ - the numbers that show the units used on a graph; a sequence of marks at regular intervals





## ANSWER KEY

Match each of the following terms to its definition:

Bar graph

Scale

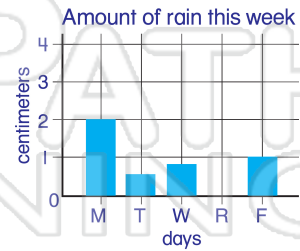
Line graph

Interval

Circle graph

Pictograph

1. **Bar graph** - a graph that uses the height or length of rectangles to compare data



2. **Circle graph** - a graph that uses segments of a circle to represent data

Student Grades



3. In num

# PREVIEW

4. L time

Please [Sign In](#) or [Sign Up](#) to download the printable version of this worksheet



5. **Pictograph** - a graph drawn using pictures to represent a quantity or amount



6. **Scale** - the numbers that show the units used on a graph; a sequence of marks at regular intervals

