



Name \_\_\_\_\_ Class \_\_\_\_\_ Date \_\_\_\_\_

- 1 A medical test indicates that a patient has a **defective protein**. This condition is most likely due to a **change in the directions coded** in the
- A number of hydrogen atoms in starch molecules
  - B sequence of inorganic molecules
  - C number of carbon atoms in sugar molecules
  - D sequence of subunits in DNA

- 2 A **small amount of DNA** was taken from a fossil of a mammoth found frozen in glacial ice. Genetic technology can be used to produce a **large quantity of identical DNA** from this mammoth's DNA. In this technology, the **original DNA** sample is used to
- A stimulate differentiation in other mammoth cells
  - B provide fragments to replace certain human body chemicals
  - C act as a template for repeated replication
  - D trigger mitosis to obtain new base sequences

- 3 Many diabetics are now using **insulin** that was made by **certain bacteria**. The **ability of these bacteria to produce insulin** was most likely the result of
- A deleting many DNA segments from bacterial DNA
  - B genetic mapping of bacterial DNA to activate

- 4 In 1994, a **new tomato variety** that ripens slowly was developed by a laboratory technique that did **not** involve methods of natural reproduction. This new variety contains a section of a DNA molecule **not** found in the tomato from which it was originally developed. **Which technique**

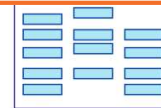


## PREVIEW

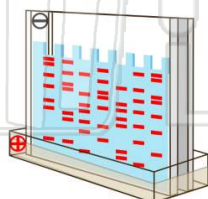
7 Please [Sign In](#) or [Sign Up](#) to download the printable version of this worksheet

- A human insulin
- B antibodies against insulin
- C enzymes that digest insulin
- D a new type of insulin

- A Bear 1 and 2
- B Bear 1 and 3
- C Bear 2 and 3
- D Bear 1 and 3



- 9 **Gel electrophoresis** is used to separate DNA fragments on the basis of their
- A size
  - B color
  - C functions
  - D chromosomes



- 10 **Strawberries can reproduce by means of runners**, which are stems that grow horizontally along the ground. At the region of the runner that touches the ground, a new plant develops. **The new plant is genetically identical to the parent because**
- A it was produced sexually
  - B nuclei traveled to the new plant through the runner to fertilize it
  - C it was produced asexually
  - D there were no other strawberry plants in the area to provide fertilization





Name \_\_\_\_\_ Class \_\_\_\_\_ Date \_\_\_\_\_

1 A medical test indicates that a patient has a **defective protein**. This condition is most likely due to a **change in the directions coded** in the

- A number of hydrogen atoms in starch molecules
- B sequence of inorganic molecules
- C number of carbon atoms in sugar molecules
- D sequence of subunits in DNA

D

2 A **small amount of DNA** was taken from a fossil of a mammoth found frozen in glacial ice. Genetic technology can be used to produce a **large quantity of identical DNA** from this mammoth's DNA. In this technology, the **original DNA** sample is used to

- A stimulate differentiation in other mammoth cells
- B provide fragments to replace certain human body chemicals
- C act as a template for repeated replication
- D trigger mitosis to obtain new base sequences

C

3 Many diabetics are now using **insulin** that was made by **certain bacteria**. The **ability of these bacteria to produce insulin** was most likely the result of

- A deleting many DNA segments from bacterial DNA
- B genetic mapping of bacterial DNA to activate

C

4 In 1994, a **new tomato variety** that ripens slowly was developed by a laboratory technique that did **not** involve methods of natural reproduction. This new variety contains a section of a DNA molecule **not** found in the tomato from which it was originally developed. **Which technique**

C



C

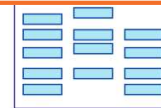
## PREVIEW

Please [Sign In](#) or [Sign Up](#) to download the printable version of this worksheet

7

- A human insulin
- B antibodies against insulin
- C enzymes that digest insulin
- D a new type of insulin

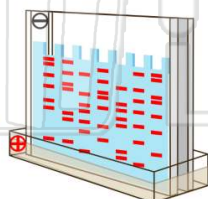
- A Bear 1 and 2
- B Bear 1 and 3
- C Bear 2 and 3
- D Bear 1 and 3



D

9 **Gel electrophoresis** is used to separate DNA fragments on the basis of their

- A size
- B color
- C functions
- D chromosomes



A

10 **Strawberries can reproduce by means of runners**, which are stems that grow horizontally along the ground. At the region of the runner that touches the ground, a new plant develops. **The new plant is genetically identical to the parent because**

- A it was produced sexually
- B nuclei traveled to the new plant through the runner to fertilize it
- C it was produced asexually
- D there were no other strawberry plants in the area to provide fertilization



C