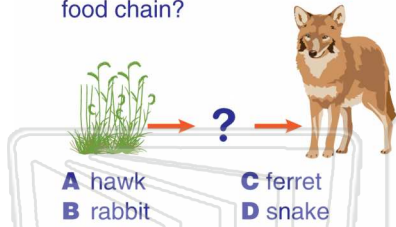




Name _____ Class _____ Date _____


1 Which organism is **missing** in this food chain?



2 A food web can become **out of balance** when the **population size of a species dramatically changes**.


True or False?

- True
- False



3 What is a living thing that **eats both plants and animals** called?

- A herbivore
- B omnivore



4 What do we call **living things that break down waste** or living things that have died in an environment?

- A carnivores



5



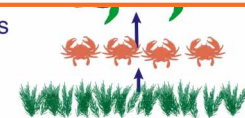
PREVIEW

7

Please [Sign In](#) or [Sign Up](#) to download the printable version of this worksheet

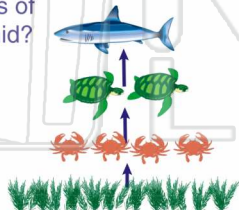
- C made up of many different food chains in an ecosystem
- D a series of organisms that eat other organisms to obtain energy

- C Consumers
- D Producers



9 How much **energy moves on** between the different levels of the energy pyramid?

- A 90%
- B 50%
- C 10%
- D none



10 Living things that are **not able to make their own food** are called _____.

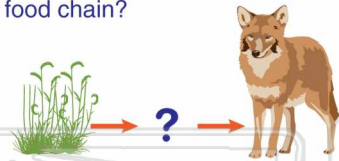
- A plants
- B forests
- C producers
- D consumers





Name _____ Class _____ Date _____

1 Which organism is **missing** in this food chain?




- A hawk
- B rabbit
- C ferret
- D snake

(B)

2 A food web can become **out of balance** when the **population size of a species dramatically changes**.

True or False?


- True
- False



(A)

3 What is a living thing that **eats both plants and animals** called?

- A herbivore
- B omnivore



(B)

4 What do we call **living things that break down waste** or living things that have died in an environment?

- A carnivores



(D)

5



(D)

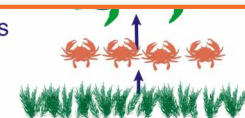
PREVIEW

Please [Sign In](#) or [Sign Up](#) to download the printable version of this worksheet

7

- C made up of many different food chains in an ecosystem
- D a series of organisms that eat other organisms to obtain energy

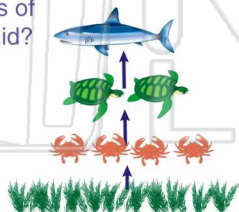
- C Consumers
- D Producers



(D)

9 How much **energy moves on** between the different levels of the energy pyramid?

- A 90%
- B 50%
- C 10%
- D none



(C)

10 Living things that are **not able to make their own food** are called _____.

- A plants
- B forests
- C producers
- D consumers



(D)