




Name _____ Class _____ Date _____


1 Which are two important **factors** that determine the characteristics of **climate**?

- A prevailing wind direction and precipitation
- B atmospheric pressure and prevailing wind direction
- C temperature and precipitation
- D atmospheric pressure and temperature



2 Global warming is the **rise** of average **temperatures** across the globe. Some evidence suggests that it is caused by _____.

- A the earth's rotation around the sun
- B the tilt of the earth on its axis
- C heat energy being trapped near the surface by gases
- D increased volcanism



3 Energy from the sun comes to the earth as electromagnetic radiation. This energy causes materials to heat up. **The heat created at the earth's surface is held near the surface** by a

4 The soil in the **taiga** is **nutrient-rich** due to the annual falling and dropping of leaves

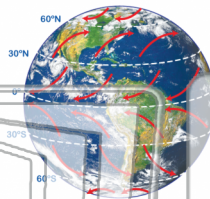


PREVIEW

Please [Sign In](#) or [Sign Up](#) to download the printable version of this worksheet

7

- A humid
- B dry
- C slow
- D rotating



A jaguar
B tree frog
C cheetah
D parrot



9 Which of these plants would **not** be found in a **tropical savannah**?

- A baobob tree
- B orchid
- C grass
- D acacia tree



10 _____ is a **temperate** biome has **rocky soil**. The winters are **cool and wet**, while the summers are **hot and dry**.

- A desert
- B savannah
- C chapparal
- D forest






Name _____ Class _____ Date _____

1 Which are two important **factors** that determine the characteristics of **climate**?

- A prevailing wind direction and precipitation
- B atmospheric pressure and prevailing wind direction
- C temperature and precipitation
- D atmospheric pressure and temperature



2 Global warming is the **rise** of average **temperatures** across the globe. Some evidence suggests that it is caused by _____.

- A the earth's rotation around the sun
- B the tilt of the earth on its axis
- C heat energy being trapped near the surface by gases
- D increased volcanism



3 Energy from the sun comes to the earth as electromagnetic radiation. This energy causes materials to heat up. **The heat created at the earth's surface is held near the surface by a**

4 The soil in the **taiga** is **nutrient-rich** due to the annual falling and dropping of leaves

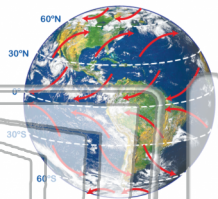


PREVIEW

Please [Sign In](#) or [Sign Up](#) to download the printable version of this worksheet

7

- A humid
- B dry
- C slow
- D rotating



- A jaguar
- B tree frog
- C cheetah
- D parrot



9 Which of these plants would **not** be found in a **tropical savannah**?

- A baobab tree
- B orchid
- C grass
- D acacia tree



10 _____ is a **temperate** biome has **rocky soil**. The winters are **cool and wet**, while the summers are **hot and dry**.

- A desert
- B savannah
- C chapparal
- D forest

