




Name _____ Class _____ Date _____


1 The **condition** of the atmosphere at a specific **time** in a specific **place** is known as the _____

A dew point
B relative humidity
C weather
D water cycle



2 As water evaporates from oceans, lakes, and rivers, the **water vapor** is held in the air. The **amount of water vapor in the air** is called _____


A humidity
B relative humidity
C dew point
D water cycle



3 Relative humidity is a percentage which compares the amount of water vapor **in the air** with the maximum amount of water vapor the air **could hold** at a specific temperature.

4 Which of the following statements about **relative humidity** is true?

A Relative humidity decreases as _____





PREVIEW

Please [Sign In](#) or [Sign Up](#) to download the printable version of this worksheet

7 _____ atmosphere are called _____.

A cumulus clouds
B stratus clouds
C cirrus clouds
D cumulonimbus clouds



They usually bring _____.

A lots of sunshine
B continuous rainstorms
C violent lightning
D clear skies



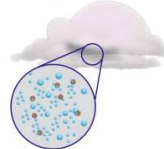
9 **Fog** is simply layers of cloud that have formed very close to the ground. What type of cloud is fog?

A cumulus clouds
B stratus clouds
C cirrus clouds
D cumulonimbus clouds



10 If you have a glass of ice water on a warm day, water condenses on the outside of the glass. When water condenses to form clouds, it condenses onto something. To form cumulus clouds, **water** condenses on _____.

A microscopic pieces of ice
B dust and smoke particles
C trees as fog, and then rises into the air
D sunlight






Name _____ Class _____ Date _____


1 The **condition** of the atmosphere at a specific **time** in a specific **place** is known as the _____

A dew point
B relative humidity
C weather
D water cycle



2 As water evaporates from oceans, lakes, and rivers, the **water vapor** is held in the air. The **amount of water vapor in the air** is called _____


A humidity
B relative humidity
C dew point
D water cycle



3 Relative humidity is a percentage which compares the amount of water vapor **in the air** with the maximum amount of water vapor the air **could hold** at a specific temperature.

4 Which of the following statements about **relative humidity** is true?

A Relative humidity decreases as _____




PREVIEW

Please [Sign In](#) or [Sign Up](#) to download the printable version of this worksheet



7 _____ atmosphere are called _____.

A cumulus clouds
B stratus clouds
C cirrus clouds
D cumulonimbus clouds



_____ They usually bring _____.

A lots of sunshine
B continuous rainstorms
C violent lightning
D clear skies



9 **Fog** is simply layers of cloud that have formed very close to the ground. What type of cloud is fog?

A cumulus clouds
B stratus clouds
C cirrus clouds
D cumulonimbus clouds



10 If you have a glass of ice water on a warm day, water condenses on the outside of the glass. When water condenses to form clouds, it condenses onto something. To form cumulus clouds, **water** condenses on _____.

A microscopic pieces of ice
B dust and smoke particles
C trees as fog, and then rises into the air
D sunlight

