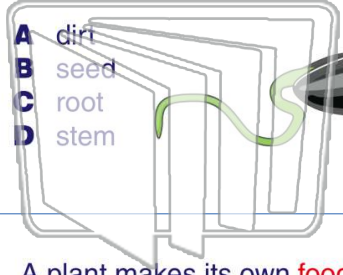




Name _____ Class _____ Date _____

1 Most **plants** begin as a _____ in the soil.



- A dirt
- B seed
- C root
- D stem

2 The parts of a plant that take in **water** and **nutrients** from the soil are _____.

- A roots
- B leaves
- C stems
- D flowers



3 A plant makes its own **food** in the _____.

4 A seed **grows** into a plant in the process of _____.

5



PREVIEW

Please [Sign In](#) or [Sign Up](#) to download the printable version of this worksheet

7


_____ has **mass** is known as _____.

- A mister
- B matter
- C mustard
- D manners



_____ is an **extinct reptile**.

- A mammal
- B planet
- C dinosaur
- D fossil



9

A **meat-eating** dinosaur that ate other dinosaurs was a _____.

- A carnivore
- B carnival
- C carrier
- D crocodile



10

A **plant-eating** dinosaur was a(n) _____.

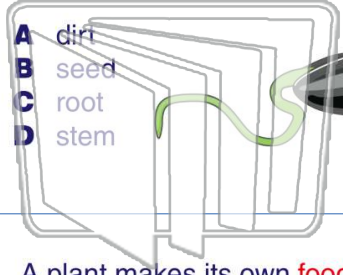
- A carnivore
- B herbivore
- C constellation
- D capillary





Name _____ Class _____ Date _____

1 Most **plants** begin as a _____ in the soil.



- A dirt
- B seed
- C root
- D stem

2 The parts of a plant that take in **water** and **nutrients** from the soil are _____.



- A roots
- B leaves
- C stems
- D flowers

3 A plant makes its own **food** in the _____.

4 A seed **grows** into a plant in the process of _____.



5

PREVIEW

Please [Sign In](#) or [Sign Up](#) to download the printable version of this worksheet

7 _____ has **mass** is known as _____.

- A mister
- B matter
- C mustard
- D manners



_____ **extinct reptile**.

- A mammal
- B planet
- C dinosaur
- D fossil



9 A **meat-eating** dinosaur that ate other dinosaurs was a _____.

- A carnivore
- B carnival
- C carrier
- D crocodile



10 A **plant-eating** dinosaur was a(n) _____.

- A carnivore
- B herbivore
- C constellation
- D capillary

