



Name _____ Class _____ Date _____

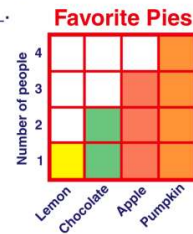
1 The number of people who like **apples** **best** is _____.

- A 4
- B 7
- C 10
- D 14

Fruit	Number of People
apple	4
grapes	7
melon	10
banana	14

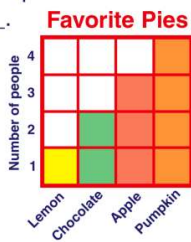
2 The number of people who like **lemon pie** **best** is _____.

- A 1
- B 2
- C 3
- D 4



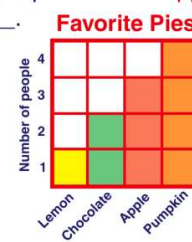
3 The number of people who like **chocolate pie** **best** is _____.

- A 1
- B 2
- C 3
- D 4



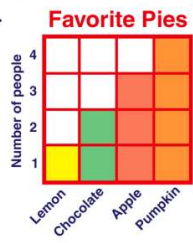
4 The number of people who like **apple pie** **best** is _____.

- A 1
- B 2
- C 3
- D 4



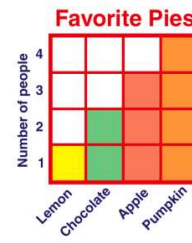
5 The number of people who like **pumpkin pie** **best** is _____.

- A 1
- B 2
- C 3
- D 4



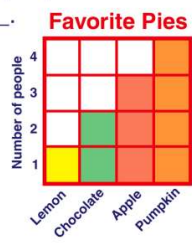
6 **More** people like **pumpkin pie** than **lemon pie**.

- A true
- B false



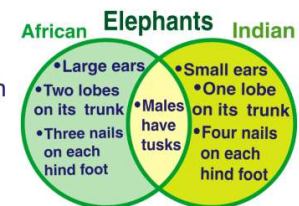
7 The number of people who took the survey is _____.

- A 3
- B 4
- C 10
- D 12



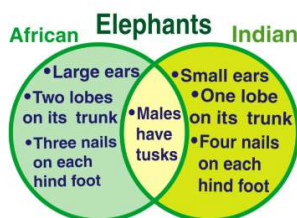
8 Which elephant has **larger** ears?

- A African
- B Indian
- C American
- D Greek



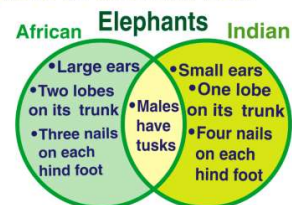
9 **Both** African and Indian male elephants have tusks.

- A true
- B false



10 How many **nails** does an **Indian** elephant have on each hind foot?

- A 1
- B 2
- C 3
- D 4





Name _____ Class _____ Date _____

1 The number of people who like **apples** **best** is _____.

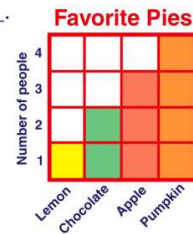
- A 4
- B 7
- C 10
- D 14

Fruit	Number of People
apple	4
grapes	7
melon	10
banana	14

(A)

2 The number of people who like **lemon pie** **best** is _____.

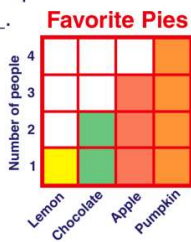
- A 1
- B 2
- C 3
- D 4



(A)

3 The number of people who like **chocolate pie** **best** is _____.

- A 1
- B 2
- C 3
- D 4



(B)

4 The number of people who like **apple pie** **best** is _____.

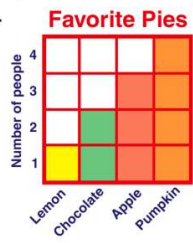
- A 1
- B 2
- C 3
- D 4



(C)

5 The number of people who like **pumpkin pie** **best** is _____.

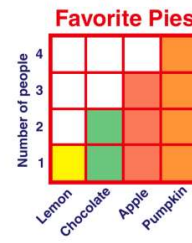
- A 1
- B 2
- C 3
- D 4



(D)

6 **More** people like **pumpkin pie** than **lemon pie**.

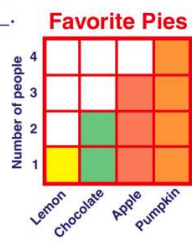
- A true
- B false



(A)

7 The number of people who took the survey is _____.

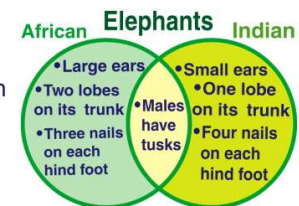
- A 3
- B 4
- C 10
- D 12



(C)

8 Which elephant has **larger** ears?

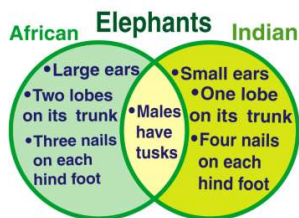
- A African
- B Indian
- C American
- D Greek



(A)

9 **Both** African and Indian male elephants have tusks.

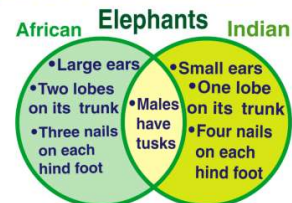
- A true
- B false



(A)

10 How many **nails** does an **Indian** elephant have on each hind foot?

- A 1
- B 2
- C 3
- D 4



(D)