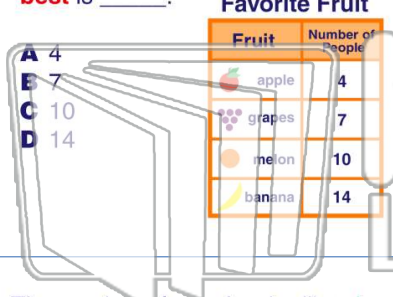




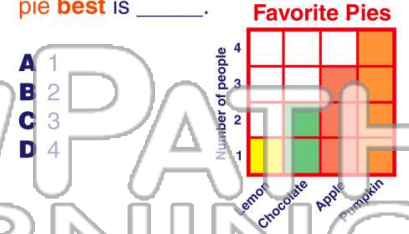
Name _____ Class _____ Date _____

1 The number of people who like **apples** **best** is _____.



- A 4
- B 7
- C 10
- D 14

2 The number of people who like **lemon pie** **best** is _____.



- A 1
- B 2
- C 3
- D 4

3 The number of people who like **chocolate pie** **best** is _____.



4 The number of people who like **apple pie** **best** is _____.



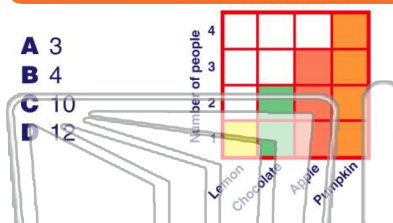
5



PREVIEW

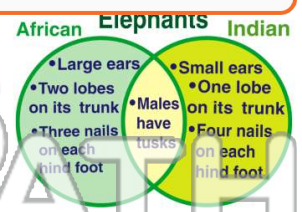
Please [Sign In](#) or [Sign Up](#) to download the printable version of this worksheet

7



- A 3
- B 4
- C 10
- D 12

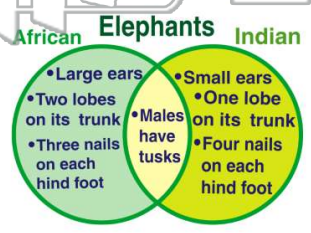
- A African
- B Indian
- C American
- D Greek



9

Both **African** and **Indian** male elephants have tusks.

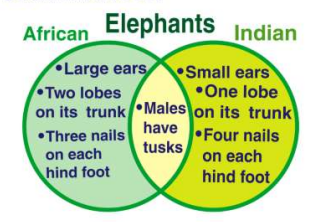
- A true
- B false



10

How many **nails** does an **Indian** elephant have on each hind foot?

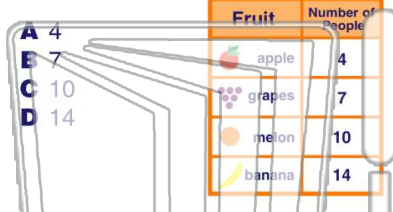
- A 1
- B 2
- C 3
- D 4





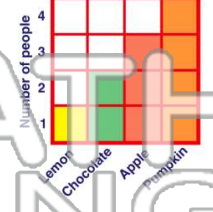
Name _____ Class _____ Date _____

1 The number of people who like **apples** best is _____.



- A 4
- B 7
- C 10
- D 14

2 The number of people who like **lemon pie** best is _____.



- A 1
- B 2
- C 3
- D 4

3 The number of people who like **chocolate pie** best is _____.



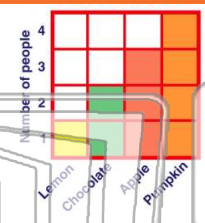
4 The number of people who like **apple pie** best is _____.



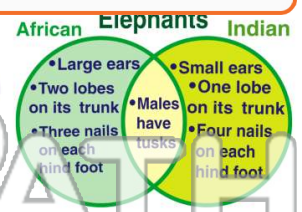
PREVIEW

Please [Sign In](#) or [Sign Up](#) to download the printable version of this worksheet

- A 3
- B 4
- C 10
- D 12

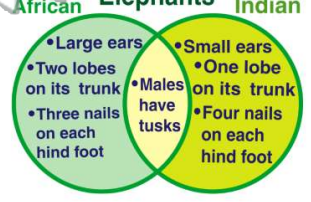


- A African
- B Indian
- C American
- D Greek



9 **Both African and Indian** male elephants have tusks.

- A true
- B false



10 How many **nails** does an **Indian** elephant have on each hind foot?

- A 1
- B 2
- C 3
- D 4

