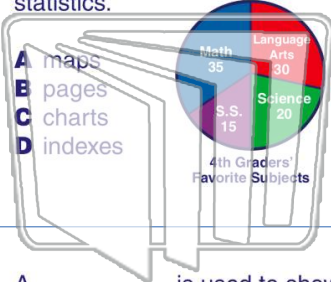






Name \_\_\_\_\_ Class \_\_\_\_\_ Date \_\_\_\_\_

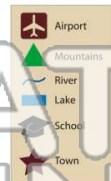
1 **Graphs** and \_\_\_\_\_ reveal information through mathematical statistics.



- A maps
- B pages
- C charts
- D indexes

2 A \_\_\_\_\_ shows what each **symbol** on a map represents.

- A camera
- B compass
- C scale
- D legend



3 A \_\_\_\_\_ is used to show events in the order that they occurred.

4 What information does this **bar graph** show?

- A what the 4<sup>th</sup> graders' favorite foods are
- B what the 4<sup>th</sup> graders' favorite

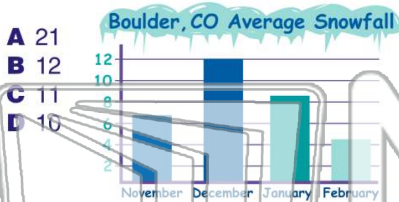
5



## PREVIEW

Please [Sign In](#) or [Sign Up](#) to download the printable version of this worksheet

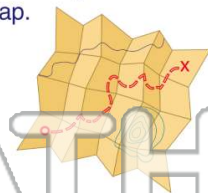
7



- A 21
- B 12
- C 11
- D 10

\_\_\_\_\_ and streets on a map.

- A compass
- B scale
- C index
- D title



9

Which event would be listed **second** on a **timeline**?

- A was born in 1912
- B death in 1993
- C marriage in 1933
- D college graduation 1930

10

When creating a **graph** or **chart** you should always remember to include \_\_\_\_\_.

- A percentages
- B a title
- C colors
- D lights

Favorite Summer Activities



Key: 1 = 2 People