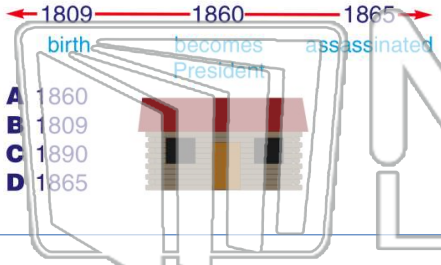


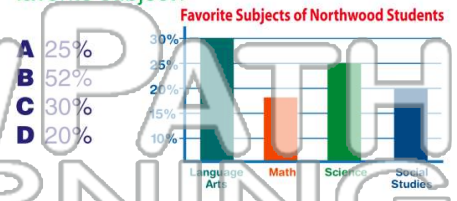


Name _____ Class _____ Date _____

1 Use the **timeline** below to tell what year Abraham Lincoln was **born**.



2 According to the **bar graph**, what percent of students chose **science** as their favorite subject?



3 Which of the following would you use a **compass** on a map for?



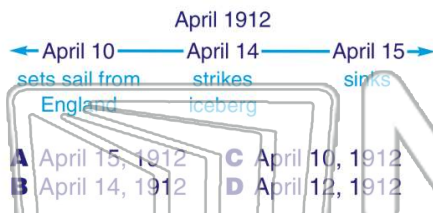
4 Use the **timeline** below to tell what year the recipe for **ice cream** was invented.



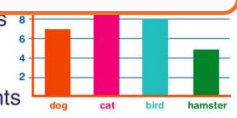
PREVIEW

Please [Sign In](#) or [Sign Up](#) to download the printable version of this worksheet

7



8 you find out from this **bar graph**?



- A how many students own a car
- B how many students own a TV
- C how many students own a drum
- D how many students own a cat

9 If you were trying to find **Main Street** but couldn't find it on the map anywhere, what **part of the map** would help you find it?



10 Which event would be listed **third** on a **timeline**?

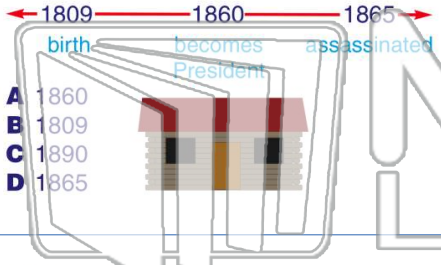
- A In 1999, played for the San Francisco Giants
- B In 2000, broke pitching arm
- C In 1998, played in minor leagues
- D In 2002, played in World Series



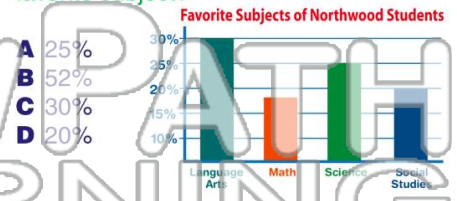


Name _____ Class _____ Date _____

1 Use the **timeline** below to tell what year Abraham Lincoln was **born**.



2 According to the **bar graph**, what percent of students chose **science** as their favorite subject?



3 Which of the following would you use a **compass** on a map for?

A to find how far away

4 Use the **timeline** below to tell what year the recipe for **ice cream** was invented.



PREVIEW

Please [Sign In](#) or [Sign Up](#) to download the printable version of this worksheet

7

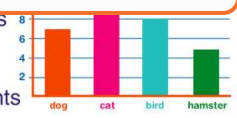
Timeline showing the sinking of the Titanic:

- April 10: sets sail from England
- April 14: strikes iceberg
- April 15: sinks

Options:

- A April 15, 1912
- B April 14, 1912
- C April 10, 1912
- D April 12, 1912

8 you find out from this **bar graph**?



- A how many students own a car
- B how many students own a TV
- C how many students own a drum
- D how many students own a cat

9 If you were trying to find **Main Street** but couldn't find it on the map anywhere, what **part of the map** would help you find it?



10 Which event would be listed **third** on a **timeline**?

- A In 1999, played for the San Francisco Giants
- B In 2000, broke pitching arm
- C In 1998, played in minor leagues
- D In 2002, played in World Series

