

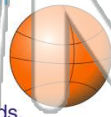


Name _____ Class _____ Date _____

1 Nathan was the best basketball player in fourth grade. He seemed to make every shot. The basketball game was tied with 30 seconds to play. Alex passed the ball and Nathan took a shot.

What would be the **best prediction** of what happened next?

A Nathan blocked his own shot.
B Nathan made the basket.
C Nathan's shot went out of bounds.
D Nathan ran off the court.



2 Luanne loved talking on the telephone. She was on the phone morning, noon, and night. One day Luanne's mom was late coming home from work. Luanne's mom tried to call home.

What would be the **best guess** of what happened when Luanne's Mom tried calling home?

A She forgot the number.
B The home phone was busy.
C She dialed the wrong number.
D She hung up before anyone answered.



3 Zach dreamed about seeing the ocean ever since he was little. Finally, he would get his chance. Zach's family was on the way to Florida for a vacation. Zach could smell the ocean air already.

4 Chelsea thought everything was funny. One day on the playground, Chelsea and Faye were swinging when all of a sudden Chelsea fell off her swing and landed right on her backside.

5



PREVIEW

Please [Sign In](#) or [Sign Up](#) to download the printable version of this worksheet

7

hand on the shelf that was holding his mom's favorite vase.

What would be the **best prediction** of what happened next?

A The vase fell to the ground.
B Liam ran out the door.
C Liam and Ian began wrestling again.
D Ian yelled at Liam.



called. She went to sit down at the piano but did not notice the piano bench was missing.

What would be the **best prediction** of what happened next?


A The bench magically appeared.
B Tracy fell because there was no bench.
C Tracy sat under the piano.
D Tracy played the piano with her feet.

9

Hogan had been making a tower out of playing cards for an hour now. He was just about to add the last card to complete his tower when his brother opened the front door. As the door opened, _____.

What would be the **best prediction** of what happened next?

A the cat ran in
B Hogan jumped up and slammed door closed
C wild dogs ran in and knocked down the tower
D the wind blew in and knocked down the tower



10

Julie and her dad were in a boat on the lake. Julie noticed a big fish swimming by and told her dad to look at the fish. As Julie and her dad leaned over to look at the fish, the boat began to tip.

What would be the **best prediction** of what happened next?

A The boat tipped over.
B The fish jumped into the boat.
C Her dad pushed Julie into the boat.
D The fish jumped out of water.



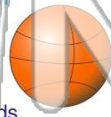


Name _____ Class _____ Date _____

1 Nathan was the best basketball player in fourth grade. He seemed to make every shot. The basketball game was tied with 30 seconds to play. Alex passed the ball and Nathan took a shot.

What would be the **best prediction** of what happened next?

A Nathan blocked his own shot.
B Nathan made the basket.
C Nathan's shot went out of bounds.
D Nathan ran off the court.



2 Luanne loved talking on the telephone. She was on the phone morning, noon, and night. One day Luanne's mom was late coming home from work. Luanne's mom tried to call home.

What would be the **best guess** of what happened when Luanne's Mom tried calling home?

A She forgot the number.
B The home phone was busy.
C She dialed the wrong number.
D She hung up before anyone answered.



3 Zach dreamed about seeing the ocean ever since he was little. Finally, he would get his chance. Zach's family was on the way to Florida for a vacation. Zach could smell the ocean air already.

4 Chelsea thought everything was funny. One day on the playground, Chelsea and Faye were swinging when all of a sudden Chelsea fell off her swing and landed right on her backside.

5

PREVIEW

Please [Sign In](#) or [Sign Up](#) to download the printable version of this worksheet

7

hand on the shelf that was holding his mom's favorite vase.

What would be the **best prediction** of what happened next?

A The vase fell to the ground.
B Liam ran out the door.
C Liam and Ian began wrestling again.
D Ian yelled at Liam.



called. She went to sit down at the piano but did not notice the piano bench was missing.

What would be the **best prediction** of what happened next?

A The bench magically appeared.
B Tracy fell because there was no bench.
C Tracy sat under the piano.
D Tracy played the piano with her feet.

9 Hogan had been making a tower out of playing cards for an hour now. He was just about to add the last card to complete his tower when his brother opened the front door. As the door opened, _____.

What would be the **best prediction** of what happened next?

A the cat ran in
B Hogan jumped up and slammed door closed
C wild dogs ran in and knocked down the tower
D the wind blew in and knocked down the tower



10 Julie and her dad were in a boat on the lake. Julie noticed a big fish swimming by and told her dad to look at the fish. As Julie and her dad leaned over to look at the fish, the boat began to tip.

What would be the **best prediction** of what happened next?

A The boat tipped over.
B The fish jumped into the boat.
C Her dad pushed Julie into the boat.
D The fish jumped out of water.

