




Name \_\_\_\_\_ Class \_\_\_\_\_ Date \_\_\_\_\_

Circle the word that describes the author's purpose for writing each paragraph.

1. Our bake sale will be held on May 5 during school hours. We need volunteers to bake cookies, cakes, pies, and snack bars. We also need volunteers to set up and tear down the display. Please tear off the response section at the bottom of this sheet to participate. Thanks for your help!



inform

entertain

persuade

2. You have to test them to believe it! STEM Lite Sweets are



- 3.

## PREVIEW

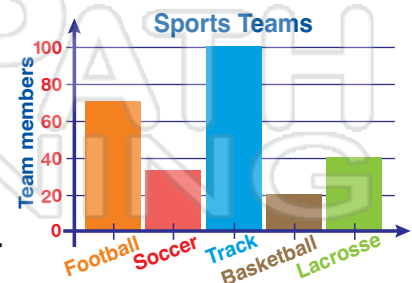
Please [Sign In](#) or [Sign Up](#) to download the printable version of this worksheet

inform

entertain

persuade

4. This math question has two parts: I and II. Part I is a multiple choice question. You must choose a single answer that best describes the graph. Part II is a word problem based on the graph. You must enter your answer, including the label, in the box provided.



inform

entertain


persuade



## ANSWER KEY

Circle the word that describes the author's purpose for writing each paragraph.

1. Our bake sale will be held on May 5 during school hours. We need volunteers to bake cookies, cakes, pies, and snack bars. We also need volunteers to set up and tear down the display. Please tear off the response section at the bottom of this sheet to participate. Thanks for your help!



**inform**

**entertain**

**persuade**

2. You have to taste them to believe it! Stevalite Sweets are



- 3.

## PREVIEW

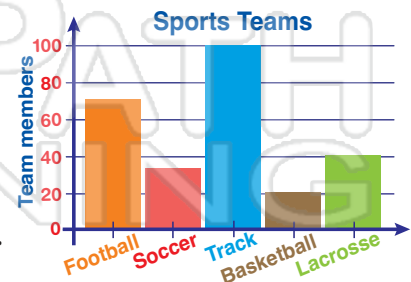
Please [Sign In](#) or [Sign Up](#) to download the printable version of this worksheet

**inform**

**entertain**

**persuade**

4. This math question has two parts: I and II. Part I is a multiple choice question. You must choose a single answer that best describes the graph. Part II is a word problem based on the graph. You must enter your answer, including the label, in the box provided.



**inform**

**entertain**

**persuade**