




Name _____ Class _____ Date _____

1 Which **caption** is a good choice for this picture?



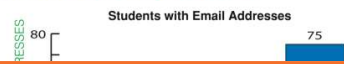
A The group spent the night shivering in the tent.
 B We love snow!
 C They flew in an airplane.
 D The lean-to was shelter, but not warmth.

2 Which **caption** could not work for this picture?



A Walking is great exercise.
 B People and pets can enjoy exercising together.
 C Swimming is a fun sport.
 D The girl and her dog walk to the park.

3 Is this graph **correctly** labeled?



4 What would be a **more fitting** title for this graph?



5




PREVIEW

Please [Sign In](#) or [Sign Up](#) to download the printable version of this worksheet

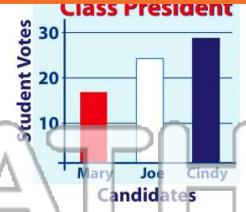
7

A She writes down the answer.
 B She surfs the web every night.
 C Computers are smaller than they used to be.
 D She loves to surf the waves.




8

A pie graph
 B line graph
 C bar graph
 D caption




9 This image is a

A globe
 B map
 C caption
 D geography book cover



10 Choose the **best caption** for the picture.

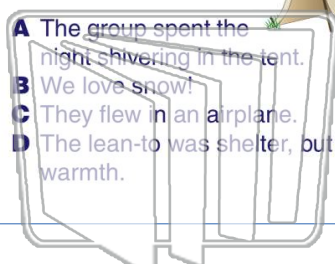
A Conch shells are from the mollusk family.
 B Oysters have pearls inside.
 C I like to go to the beach.
 D Do you like starfish?





Name _____ Class _____ Date _____

1 Which **caption** is a good choice for this picture?



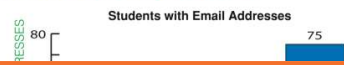
- A The group spent the night shivering in the tent.
- B We love snow!
- C They flew in an airplane.
- D The lean-to was shelter, but not warmth.

2 Which **caption** could not work for this picture?



- A Walking is great exercise.
- B People and pets can enjoy exercising together.
- C Swimming is a fun sport.
- D The girl and her dog walk to the park.

3 Is this graph **correctly** labeled?



4 What would be a **more fitting** title for this graph?



5



PREVIEW

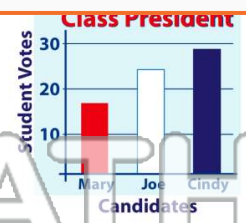
Please [Sign In](#) or [Sign Up](#) to download the printable version of this worksheet

7

- A She writes down the answer.
- B She surfs the web every night.
- C Computers are smaller than they used to be.
- D She loves to surf the waves.



- A pie graph
- B line graph
- C bar graph
- D caption



9

This image is a

- A globe
- B map
- C caption
- D geography book cover



10

Choose the **best** caption for the picture.

- A Conch shells are from the mollusk family.
- B Oysters have pearls inside.
- C I like to go to the beach.
- D Do you like starfish?

