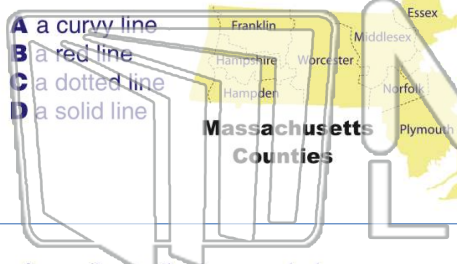




Name _____ Class _____ Date _____

1 What symbol is used to represent county lines on the map?



2 On a chart, the **column** _____ tells us what data is in the column.

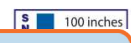
Pet	#Sold
Fish	12
Hamsters	2
Lizards	4

- A color
- B number
- C heading
- D letters

3 According to the bar graph, how many girls chose soccer as their favorite sport?



4 According to the legend on the map, which city receives the highest amount of snowfall?

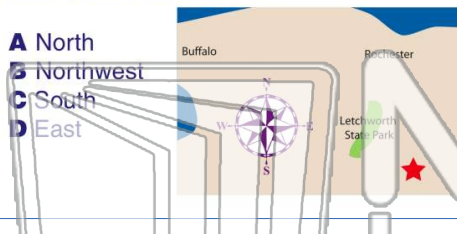


5

PREVIEW

Please [Sign In](#) or [Sign Up](#) to download the printable version of this worksheet

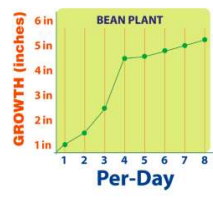
7 state park to the red star?



- A several colors
- B a title
- C a bar
- D shading

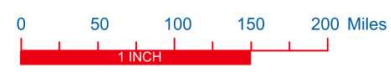
9 What does the line graph represent?

- A how many inches the plant grew per day
- B how many centimeters the plant grew per day
- C how many inches the plant grew per hour
- D how many feet the plant grew per week



10 One inch of a road on the map represents _____ miles.

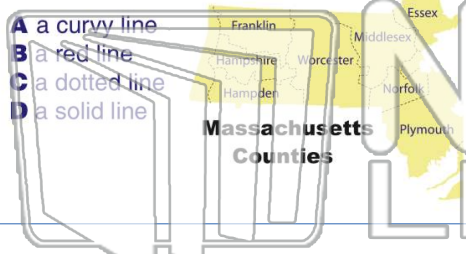
- A 450
- B 50
- C 150
- D 300





Name _____ Class _____ Date _____

1 What symbol is used to represent county lines on the map?



2 On a chart, the **column** _____ tells us what data is in the column.

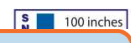
Pet	#Sold
Fish	12
Hamsters	2
Lizards	4

- A color
- B number
- C heading
- D letters

3 According to the bar graph, how many girls chose soccer as their favorite sport?



4 According to the legend on the map, which city receives the highest amount of snowfall

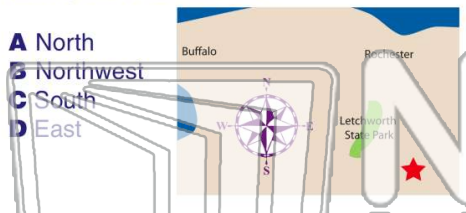


5

PREVIEW

Please [Sign In](#) or [Sign Up](#) to download the printable version of this worksheet

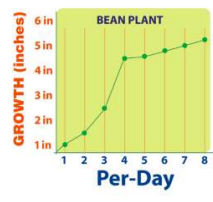
7 state park to the red star?



- A several colors
- B a title
- C a bar
- D shading

9 What does the line graph represent?

- A how many inches the plant grew per day
- B how many centimeters the plant grew per day
- C how many inches the plant grew per hour
- D how many feet the plant grew per week



10 One inch of a road on the map represents _____ miles.

- A 450
- B 50
- C 150
- D 300

