




Addition Facts

Math

Name _____ Class _____ Date _____

1 $1 + 1 = \underline{\quad}$



6 $3 + 1 = \underline{\quad}$



2 Which is right?
Circle it.




$5 + 1 = 5$

$5 + 1 = 4$

$5 + 1 = 6$

$5 + 1 = 3$

7 Which is right? Circle it.




$5 + 3 = 5$

$5 + 3 = 7$


$5 + 3 = 6$

$5 + 3 = 8$

3 $2 + 5 = \underline{\quad}$



8 Which is right?
Circle it.



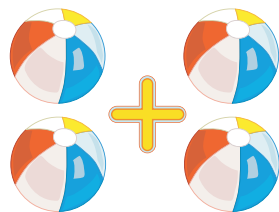
$3 + 6 = 9$

$3 + 6 = 10$

$3 + 6 = 6$

$3 + 6 = 3$

4 Which is right?
Circle it.




$2 + 2 = 2$

$2 + 2 = 4$

$2 + 2 = 3$

$2 + 2 = 5$


5 $4 + 4 = \underline{\quad}$



9 $2 + 4 = \underline{\quad}$



10 $6 + 4 = \underline{\quad}$






Addition Facts - Answer Key

Math

Name _____ Class _____ Date _____

1 $1 + 1 = \underline{2}$



6 $3 + 1 = \underline{4}$



2 Which is right?
Circle it.




$5 + 1 = 5$

$5 + 1 = 4$

$5 + 1 = 6$

$5 + 1 = 3$

7 Which is right? Circle it.




$5 + 3 = 5$

$5 + 3 = 7$


$5 + 3 = 6$

$5 + 3 = 8$

3 $2 + 5 = \underline{7}$



8 Which is right?
Circle it.



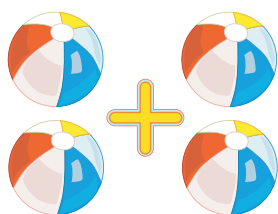
$3 + 6 = 9$

$3 + 6 = 10$

$3 + 6 = 6$

$3 + 6 = 3$

4 Which is right?
Circle it.



$2 + 2 = 2$

$2 + 2 = 4$


$2 + 2 = 3$

$2 + 2 = 5$

9 $2 + 4 = \underline{6}$



5 $4 + 4 = \underline{8}$



10 $6 + 4 = \underline{10}$

