



Name _____

Date _____

Addition and Subtraction

Draw one more in each group and write how many there are altogether.



.....
.....

.....
.....

.....
.....

.....
.....

.....
.....

.....
.....

PREVIEW

Please [Sign In](#) or [Sign Up](#) to download the printable version of this worksheet

+

=

5 6 7 8

+

=

3 4 5 6

+

=

3 4 5 6



Name _____



Date _____



answer key



Addition and Subtraction



Draw one more in each group and write how many there are altogether.




 
.....
2

 
.....
5

 
.....
6

 
.....
4


.....
4




.....
9









PREVIEW

Please [Sign In](#) or [Sign Up](#) to download the printable version of this worksheet

 +  = 5 6 7 8

 +  = 3 4 5 6

 +  = 3 4 5 6