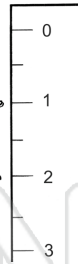




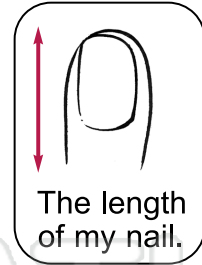
Name _____

Date _____

What is 1 centimeter long?



Use a ruler to find things that are 1 centimeter long or wide. Draw a picture of each item and write a label.



--	--	--	--



PREVIEW

Please [Sign In](#) or [Sign Up](#) to download the printable version of this worksheet

Write each length in centimeters.

estimate _____

estimate _____

estimate _____

estimate _____

estimate _____

estimate _____

estimate _____

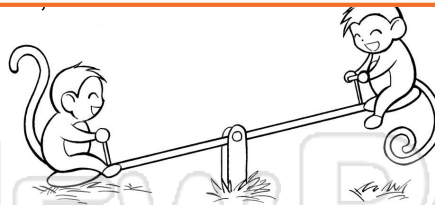
estimate _____

estimate _____

estimate _____

estimate _____

estimate _____



length _____

length _____

length _____

length _____

length _____

length _____

length _____

length _____

length _____

length _____

length _____

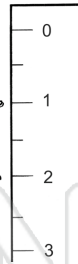
length _____



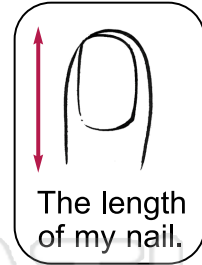
Name _____

Date _____

What is 1 centimeter long?



Use a ruler to find things that are 1 centimeter long or wide. Draw a picture of each item and write a label.



--	--	--	--



PREVIEW

Please [Sign In](#) or [Sign Up](#) to download the printable version of this worksheet

Write each length in centimeters.

estimate _____

estimate _____

estimate _____

estimate _____

estimate _____

estimate _____

estimate _____

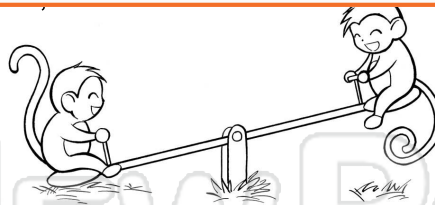
estimate _____

estimate _____

estimate _____

estimate _____

estimate _____



length 1

length 2

length 1

length 4

length 3

length 5

length 3

length 7

length 6

length 2

length 8

length 9