



# Solid Shapes

Math

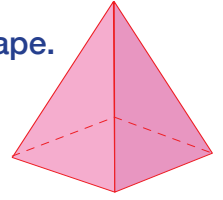
Name \_\_\_\_\_ Class \_\_\_\_\_ Date \_\_\_\_\_

1 Name the **solid shape**.



\_\_\_\_\_

6 Circle the **name** of the shape.



cone

pyramid

prism

2 Name the **solid shape**.



\_\_\_\_\_

7 Which **shape**? Circle it.



3 Which **shape**? Circle it.

**PREVIEW**

Please [Sign In](#) or [Sign Up](#) to download the printable version of this worksheet

4 v

5 Which **shape**? Circle it.




sphere

cube

prism

10 Cross out the **rectangular prism**.





# Solid Shapes - Answer Key

Math

Name \_\_\_\_\_ Class \_\_\_\_\_ Date \_\_\_\_\_

1 Name the **solid shape**.

\_\_\_\_\_  
cube

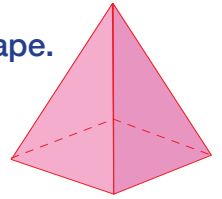


6 Circle the **name** of the shape.

cone

pyramid

prism



2 Name the **solid shape**.

\_\_\_\_\_  
cylinder



7 Which **shape**? Circle it.



3 Which **shape**? Circle it.

4 v

## PREVIEW

Please [Sign In](#) or [Sign Up](#) to download the printable version of this worksheet

5 Which **shape**? Circle it.



sphere

cube

prism

10 Cross out the **rectangular prism**.

