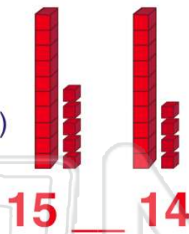




Name _____ Class _____ Date _____

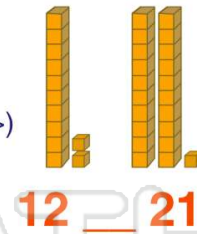
1

- A less than (<)
- B greater than (>)
- C equal (=)



2

- A less than (<)
- B greater than (>)
- C equal (=)




3

- A less than (<)
- B greater than (>)



4

- A less than (<)
- B greater than (>)



5



PREVIEW

Please [Sign In](#) or [Sign Up](#) to download the printable version of this worksheet

7



9

More than 23

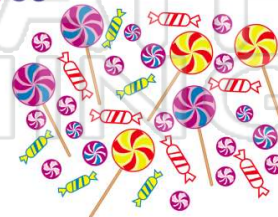
- A 19
- B 20
- C 32
- D 23



10

Less than 35

- A 35
- B 40
- C 38
- D 26

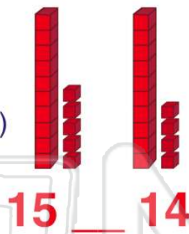




Name _____ Class _____ Date _____

1

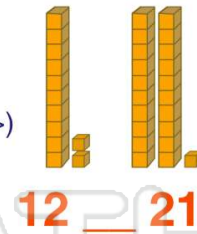
- A less than (<)
- B greater than (>)
- C equal (=)



(B)

2

- A less than (<)
- B greater than (>)
- C equal (=)



(A)

3


- A less than (<)
- B greater than (>)



(B)

4

- A less than (<)
- B greater than (>)



(A)

5



(A)

PREVIEW

Please [Sign In](#) or [Sign Up](#) to download the printable version of this worksheet

7



(B)

9

More than 23

- A 19
- B 20
- C 32
- D 23

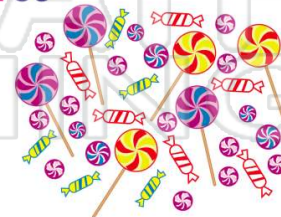


(C)

10

Less than 35

- A 35
- B 40
- C 38
- D 26



(D)