




Name _____ Class _____ Date _____

1 Which shows **shortest to tallest**?



2 Which order is **correct**?

- A 2 5 3 4 1
- B 1 2 3 4 5
- C 3 4 2 1 5
- D 5 2 3 1 4

3 Which shows **shortest to tallest**?



4 Which order is **correct**?

- A 6 7 8 9 10
- B 10 7 6 8 9



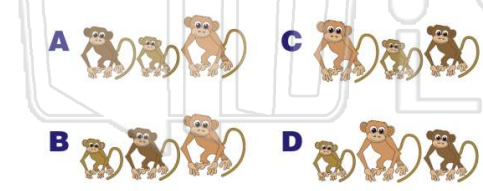
PREVIEW

Please [Sign In](#) or [Sign Up](#) to download the printable version of this worksheet

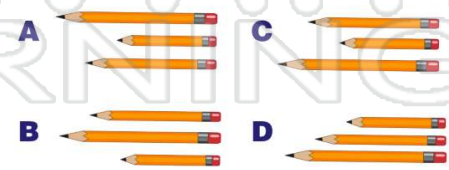
7 **C** 14 36 25 48
D 48 25 36 14



9 Which shows **smallest to biggest**?



10 Which order is **correct**?



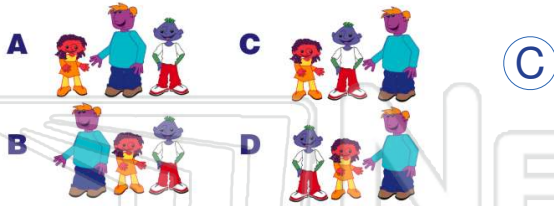


Ordering Numbers and Objects by Size

Math

Name _____ Class _____ Date _____

1 Which shows **shortest to tallest**?



2 Which order is **correct**?

- A 2 5 3 4 1
- B 1 2 3 4 5
- C 3 4 2 1 5
- D 5 2 3 1 4

3 Which shows **shortest to tallest**?



4 Which order is **correct**?

- A 6 7 8 9 10
- B 10 7 6 8 9



PREVIEW


Please [Sign In](#) or [Sign Up](#) to download the printable version of this worksheet

7

B D

C 14 36 25 48
D 48 25 36 14

9 Which shows **smallest to biggest**?



10 Which order is **correct**?

