

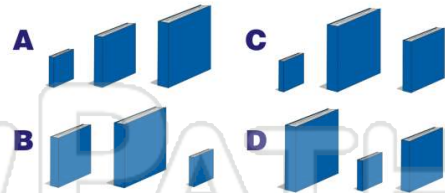


Name _____ Class _____ Date _____

1 Which order is **correct**?

- A 24 13 38 42
- B 13 24 38 42
- C 42 24 13 38
- D 42 13 38 24

2 Which shows **small to big**?



3 Which shows **small to big**?



4 Which shows **smallest to biggest**?



5



PREVIEW

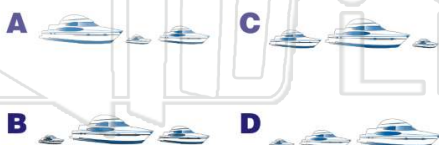
Please [Sign In](#) or [Sign Up](#) to download the printable version of this worksheet

7



- C 45 36 61 72
- D 36 45 61 72

9 Which shows **small to big**?



10 Which shows **smallest to biggest**?





Ordering Numbers and Objects by Size

Math

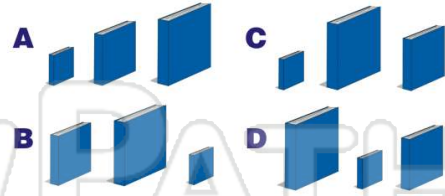
Name _____ Class _____ Date _____

1 Which order is **correct**?

- A 24 13 38 42
- B 13 24 38 42
- C 42 24 13 38
- D 42 13 38 24

(B)

2 Which shows **small to big**?



(A)

3 Which shows **small to big**?



(C)

4 Which shows **smallest to biggest**?



(D)

5



(A)

PREVIEW

Please [Sign In](#) or [Sign Up](#) to download the printable version of this worksheet

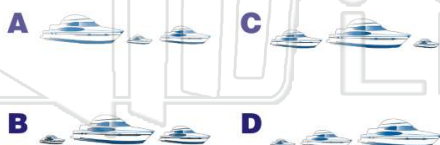
7



- C 45 36 61 72
- D 36 45 61 72

(D)

9 Which shows **small to big**?



(D)

10 Which shows **smallest to biggest**?



(B)