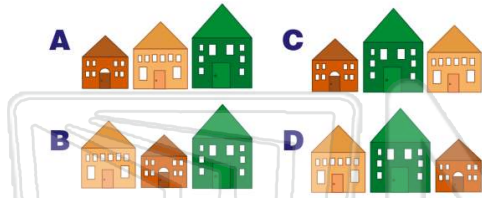





Name _____ Class _____ Date _____

1 Which shows **smallest to biggest**?



2 Which shows **smallest to biggest**?



3 Which shows **smallest to biggest**?



4 Which order is **correct**?

- A 54 65 76 87
- B 65 76 54 87

5



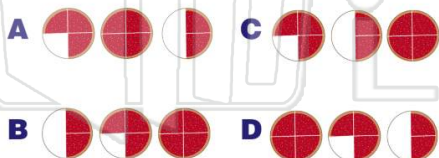
PREVIEW

Please [Sign In](#) or [Sign Up](#) to download the printable version of this worksheet


7



9 Which shows **smallest to biggest**?



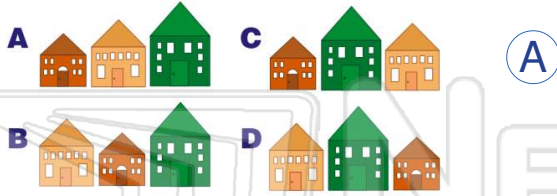
10 Which shows **smallest to biggest**?



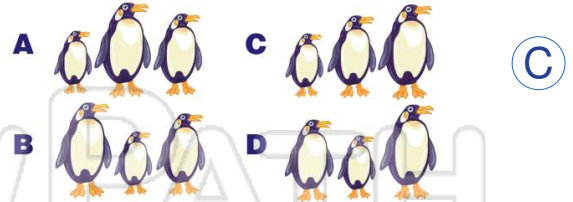


Name _____ Class _____ Date _____

1 Which shows **smallest to biggest**?



2 Which shows **smallest to biggest**?



3 Which shows **smallest to biggest**?



4 Which order is **correct**?

- A 54 65 76 87
- B 65 76 54 87

5



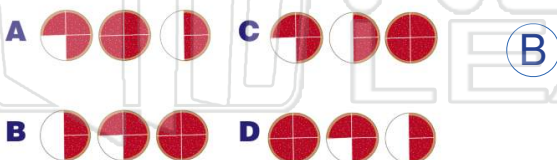
PREVIEW

Please [Sign In](#) or [Sign Up](#) to download the printable version of this worksheet

7



9 Which shows **smallest to biggest**?



10 Which shows **smallest to biggest**?

