

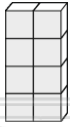


Name \_\_\_\_\_

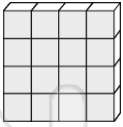
Date \_\_\_\_\_

Guess the volume of each model.  
Make each one with blocks and count to find out.

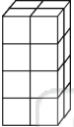
**YOU NEED:**  
blocks




I guessed \_\_\_\_\_  
Volume = \_\_\_\_\_




I guessed \_\_\_\_\_  
Volume = \_\_\_\_\_




I guessed \_\_\_\_\_  
Volume = \_\_\_\_\_




I guessed \_\_\_\_\_



I guessed \_\_\_\_\_

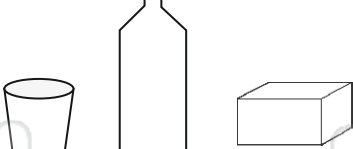


I guessed \_\_\_\_\_





**PREVIEW**

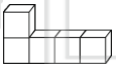
Please [Sign In](#) or [Sign Up](#) to download  
the printable version of this worksheet



Write the volume of each model.




\_\_\_\_\_ blocks



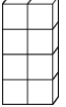
\_\_\_\_\_ blocks




\_\_\_\_\_ blocks



\_\_\_\_\_ blocks



\_\_\_\_\_ blocks



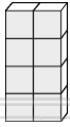
\_\_\_\_\_ blocks



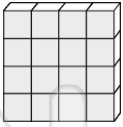
Name \_\_\_\_\_

Guess the volume of each model.  
Make each one with blocks and count to find out.

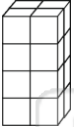
**YOU NEED:**  
blocks




I guessed 8  
Volume = 8




I guessed 16  
Volume = 16




I guessed 16  
Volume = 16




I guessed 6



I guessed 12

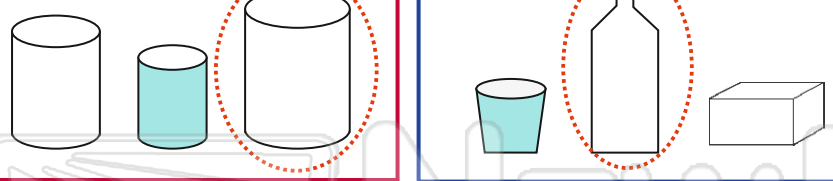


I guessed 8





**PREVIEW**

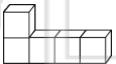
Please [Sign In](#) or [Sign Up](#) to download the printable version of this worksheet





Write the volume of each model.




6 blocks



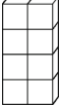
5 blocks




8 blocks



12 blocks



8 blocks



12 blocks