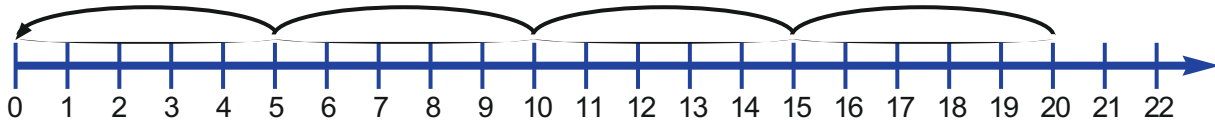




Name _____

Date _____

What counting pattern does this number line show?



This number pattern starts at _____ and ends at _____.

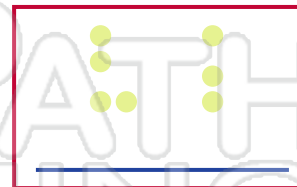
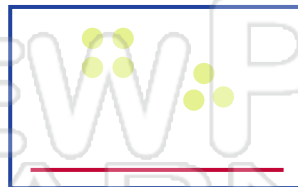
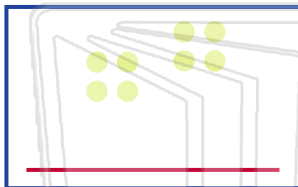

It is going _____ by _____.

Start at **2**. Show a counting pattern going up by tens.



PREVIEW

Please [Sign In](#) or [Sign Up](#) to download
the printable version of this worksheet



How did you find out?

One way is to _____

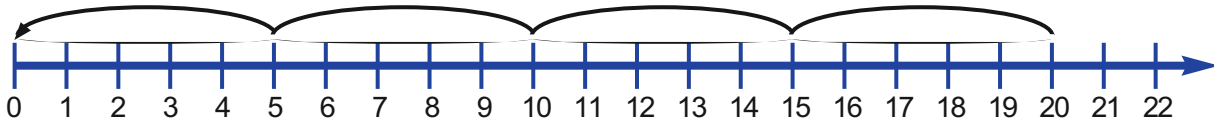
Another way is to _____



Name _____

Date _____

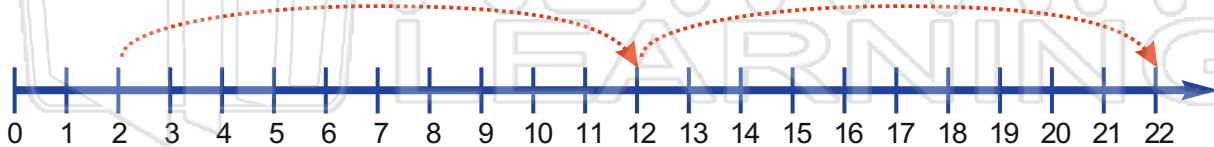
What counting pattern does this number line show?



This number pattern starts at 20 and ends at 0.

It is going down by 5s.

Start at **2**. Show a counting pattern going up by tens.



PREVIEW

Please [Sign In](#) or [Sign Up](#) to download the printable version of this worksheet

<u>odd</u>	<u>even</u>	<u>odd</u>	
<u>even</u>	<u>even</u>	<u>odd</u>	<u>odd</u>

How did you find out?

One way is to _____

Another way is to _____