



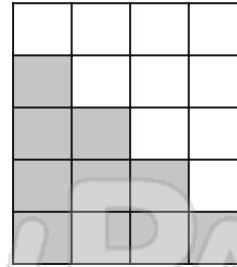
Name _____

Date _____



YOU NEED:
blocks

Ellie made a step pattern with blocks and wrote number sentences for each row.




- $0 + 4 = 4$
- $1 + 3 = 4$
- $2 + 2 = 4$
- $3 + 1 = 4$
- $4 + 0 = 4$

Make a step pattern for **5** and write number sentences.



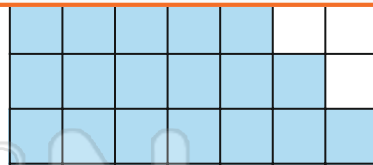

Make a step pattern for **6** and write number sentences.





PREVIEW


Please [Sign In](#) or [Sign Up](#) to download the printable version of this worksheet



Write the missing numbers:




$$3 + \underline{\hspace{1cm}} = 4 + \underline{\hspace{1cm}}$$



$$\underline{\hspace{1cm}} + \underline{\hspace{1cm}} = \underline{\hspace{1cm}} + \underline{\hspace{1cm}}$$



$$\underline{\hspace{1cm}} + \underline{\hspace{1cm}} = \underline{\hspace{1cm}} + \underline{\hspace{1cm}}$$



$$\underline{\hspace{1cm}} + \underline{\hspace{1cm}} = \underline{\hspace{1cm}} + \underline{\hspace{1cm}}$$



$$\underline{\hspace{1cm}} + \underline{\hspace{1cm}} = \underline{\hspace{1cm}} + \underline{\hspace{1cm}}$$



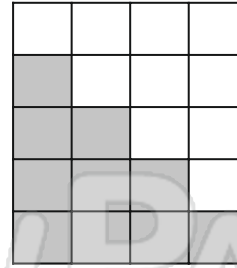
Name _____

Date _____



YOU NEED:
blocks

Ellie made a step pattern with blocks and wrote number sentences for each row.



$0 + 4 = 4$

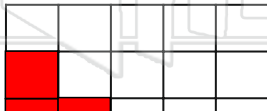
$1 + 3 = 4$

$2 + 2 = 4$

$3 + 1 = 4$

$4 + 0 = 4$


Make a step pattern for **5** and write number sentences.



$0 + 5 = 5$

$1 + 4 = 5$

Make a step pattern for **6** and write number sentences.



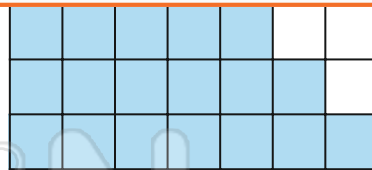
$0 + 6 = 6$

$1 + 5 = 6$



PREVIEW

Please [Sign In](#) or [Sign Up](#) to download the printable version of this worksheet



$5 + 2 = 7$


$6 + 1 = 7$

$7 + 0 = 7$

Write the missing numbers:



$3 + 4 = 4 + 3$



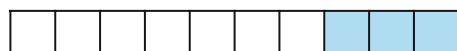
$7 + 2 = 2 + 7$



$4 + 6 = 6 + 4$



$3 + 5 = 5 + 3$



$7 + 3 = 3 + 7$