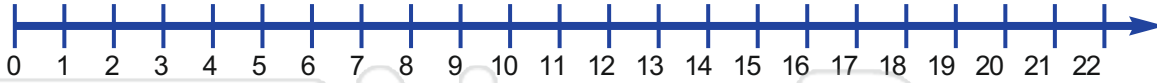




Name _____

Date _____

Use the number line to find the answers.

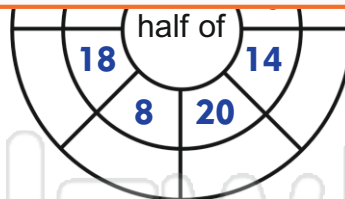
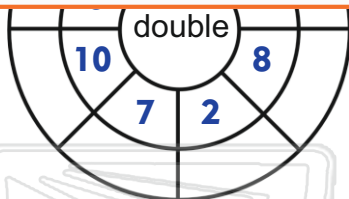


$6 + 4 =$ _____	$6 - 4 =$ _____	$7 - 5 =$ _____
$7 + 5 =$ _____	$10 + 4 =$ _____	$10 - 4 =$ _____
$8 - 5 =$ _____	$8 + 5 =$ _____	$12 - 4 =$ _____
$12 + 4 =$ _____	$11 - 3 =$ _____	$11 + 3 =$ _____



PREVIEW

Please [Sign In](#) or [Sign Up](#) to download the printable version of this worksheet



Double these numbers and add one more:

_____ 5 _____ 2 _____ 7 _____ 4
_____ 1 _____ 6 _____ 3 _____ 9

Double these numbers and take away one:

_____ 2 _____ 6 _____ 5 _____ 3
_____ 8 _____ 4 _____ 1 _____ 7



Name _____

Date _____

Use the number line to find the answers.

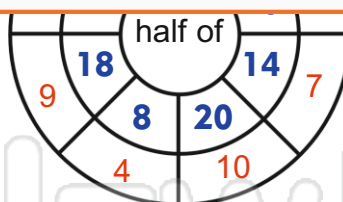
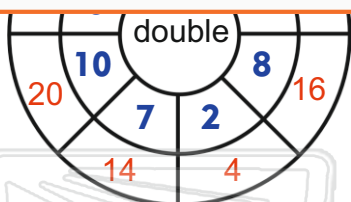


$6 + 4 = 10$	$6 - 4 = 2$	$7 - 5 = 2$
$7 + 5 = 12$	$10 + 4 = 14$	$10 - 4 = 6$
$8 - 5 = 3$	$8 + 5 = 13$	$12 - 4 = 8$
$12 + 4 = 16$	$11 - 3 = 8$	$11 + 3 = 14$



PREVIEW

Please [Sign In](#) or [Sign Up](#) to download the printable version of this worksheet



Double these numbers and add one more:

$\frac{11}{\underline{\quad}}$	5	$\frac{5}{\underline{\quad}}$	2	$\frac{15}{\underline{\quad}}$	7	$\frac{9}{\underline{\quad}}$	4
$\frac{3}{\underline{\quad}}$	1	$\frac{13}{\underline{\quad}}$	6	$\frac{7}{\underline{\quad}}$	3	$\frac{19}{\underline{\quad}}$	9

Double these numbers and take away one:

$\frac{3}{\underline{\quad}}$	2	$\frac{11}{\underline{\quad}}$	6	$\frac{9}{\underline{\quad}}$	5	$\frac{5}{\underline{\quad}}$	3
$\frac{15}{\underline{\quad}}$	8	$\frac{7}{\underline{\quad}}$	4	$\frac{1}{\underline{\quad}}$	1	$\frac{13}{\underline{\quad}}$	7