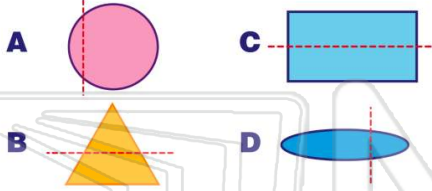


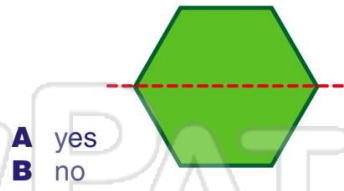


Name \_\_\_\_\_ Class \_\_\_\_\_ Date \_\_\_\_\_

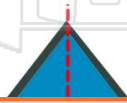
1 Which one shows **symmetry**?



2 Does this show **symmetry**?



3 Does this show **symmetry**?



4 Does this show **symmetry**?



5



## PREVIEW

Please [Sign In](#) or [Sign Up](#) to download the printable version of this worksheet


7



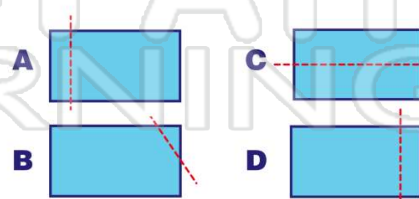
A yes  
B no

9 Is this **symmetrical**?

A yes  
B no



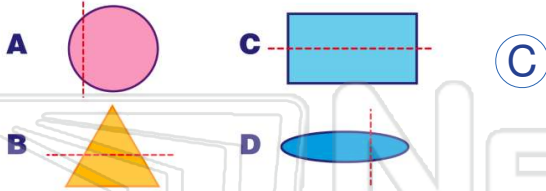
10 Which one shows **symmetry**?



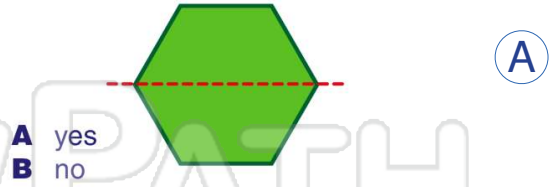


Name \_\_\_\_\_ Class \_\_\_\_\_ Date \_\_\_\_\_

1 Which one shows **symmetry**?



2 Does this show **symmetry**?



3 Does this show **symmetry**?



4 Does this show **symmetry**?



## PREVIEW

Please [Sign In](#) or [Sign Up](#) to download the printable version of this worksheet



A yes  
B no

9 Is this **symmetrical**?



10 Which one shows **symmetry**?

